

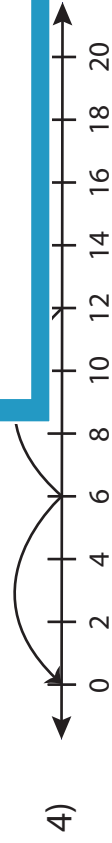
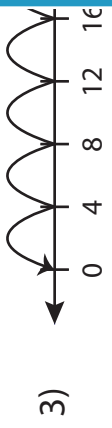
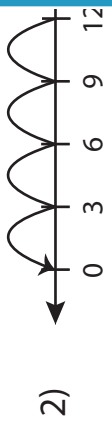
Name : _____

Score : _____

Number Line Vs Division Sentence

Sheet 1

Match each number line to its equivalent division sentence.



PREVIEW

Gain complete access to the largest collection of worksheets in all subjects!

Members, please log in to download this worksheet.

Not a member? Please sign up to gain complete access.

www.mathworksheets4kids.com

32 ÷ 4 = 8

30 ÷ 5 = 6

10 ÷ 2 = 5

12 ÷ 3 = 4

12 ÷ 6 = 2

Name : _____

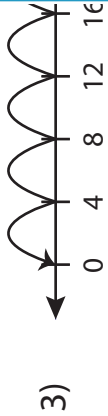
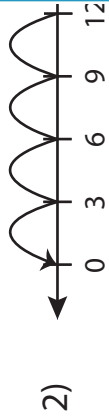
Score : _____

Answer key

Number Line Vs Division Sentence

Sheet 1

Match each number line to its equivalent division sentence.



PREVIEW

Gain complete access to the largest collection of worksheets in all subjects!

Members, please log in to download this worksheet.

Not a member? Please sign up to gain complete access.

www.mathworksheets4kids.com

$32 \div 4 = 8$

$30 \div 5 = 6$

$10 \div 2 = 5$

$12 \div 3 = 4$

$12 \div 6 = 2$