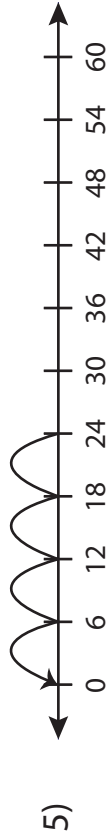
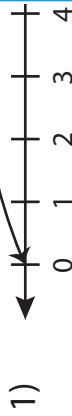


# Number Line Vs Division Sentence

Sheet 3

Match each number line to its equivalent division sentence.



## PREVIEW

Gain complete access to the largest collection of worksheets in all subjects!

Members, please log in to download this worksheet.

Not a member? Please sign up to gain complete access.

[www.mathworksheets4kids.com](http://www.mathworksheets4kids.com)

$$24 \div 3 = 8$$

$$40 \div 8 = 5$$

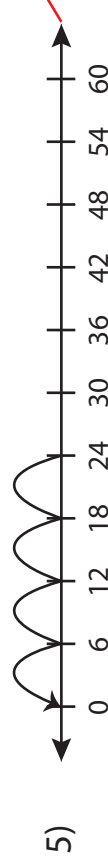
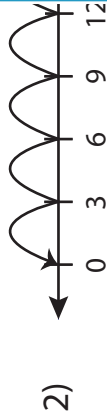
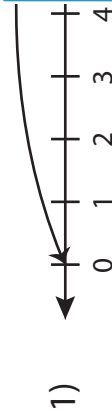
$$24 \div 6 = 4$$

$$40 \div 10 = 4$$

$$9 \div 9 = 1$$

# Number Line Vs Division Sentence

Match each number line to its equivalent division sentence.



## PREVIEW

Gain complete access to the largest collection of worksheets in all subjects!

Members, please log in to download this worksheet.

Not a member? Please sign up to gain complete access.

[www.mathworksheets4kids.com](http://www.mathworksheets4kids.com)

$24 \div 3 = 8$

$40 \div 8 = 5$

$24 \div 6 = 4$

$40 \div 10 = 4$

$9 \div 9 = 1$