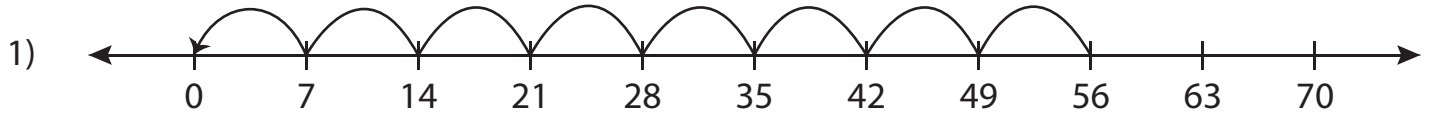


Number Line Division - MCQ

Sheet 4

Identify the correct division sentence for each number line.

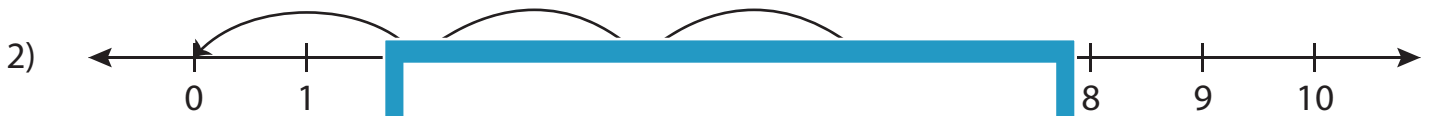


a) $70 \div 7 = 10$

b) $56 \div 14 = 4$

c) $35 \div 7 = 5$

d) $56 \div 7 = 8$



a) $10 \div 2 = 5$

d) $9 \div 3 = 3$



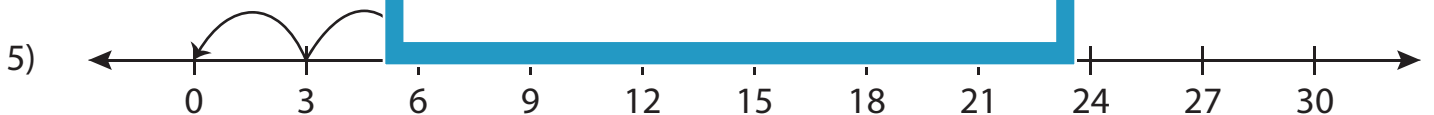
a) $40 \div 4 = 10$

d) $24 \div 6 = 4$



a) $90 \div 6 = 15$

d) $54 \div 3 = 18$

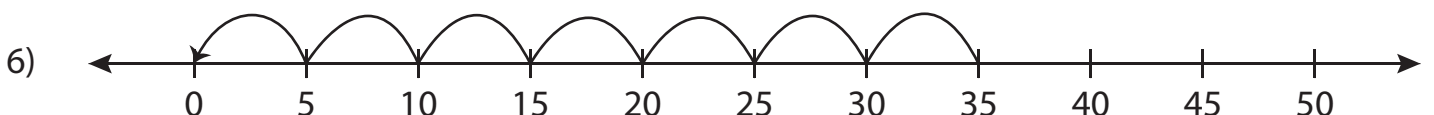


a) $15 \div 5 = 3$

b) $15 \div 1 = 15$

c) $30 \div 5 = 6$

d) $15 \div 3 = 5$



a) $35 \div 5 = 7$

b) $21 \div 3 = 7$

c) $35 \div 7 = 5$

d) $21 \div 7 = 3$

PREVIEW

Gain complete access to the largest
collection of worksheets in all subjects!

Members, please
log in to
download this
worksheet.

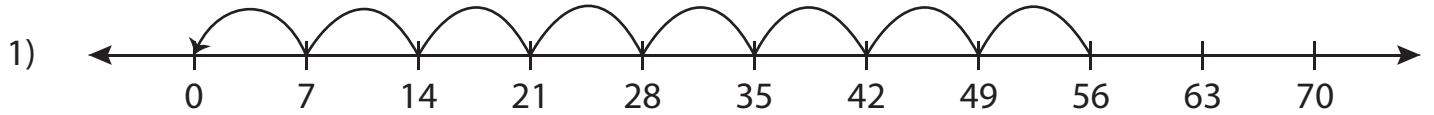
Not a member?
Please sign up to
gain complete
access.

www.mathworksheets4kids.com

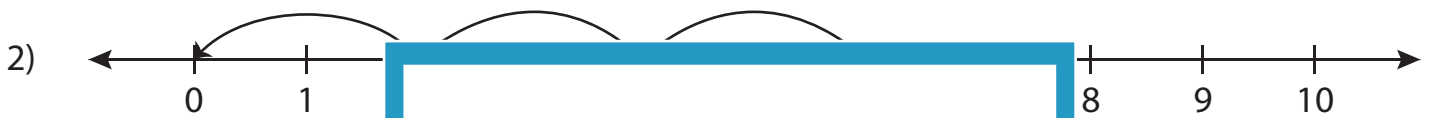
Number Line Division - MCQ

Sheet 4

Identify the correct division sentence for each number line.



- a) $70 \div 7 = 10$ b) $56 \div 14 = 4$ c) $35 \div 7 = 5$ d) $56 \div 7 = 8$



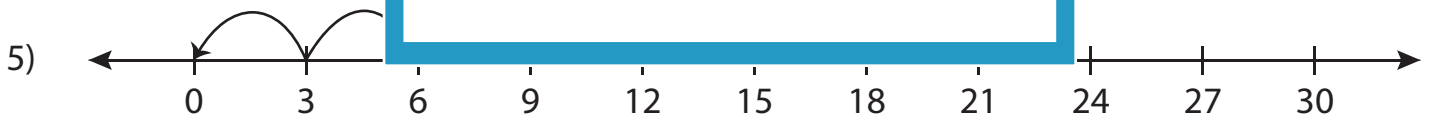
- a) $10 \div 2 = 5$ d) $9 \div 3 = 3$



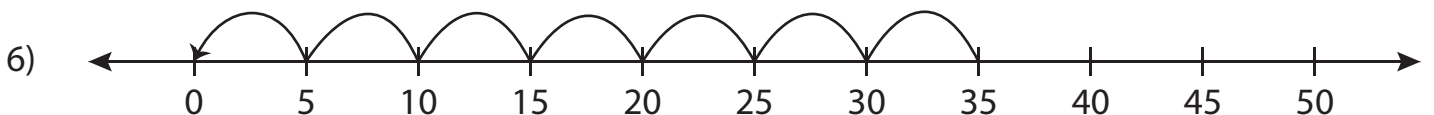
- a) $40 \div 4 = 10$ d) $24 \div 6 = 4$



- a) $90 \div 6 = 15$ d) $54 \div 3 = 18$



- a) $15 \div 5 = 3$ b) $15 \div 1 = 15$ c) $30 \div 5 = 6$ d) $15 \div 3 = 5$



- a) $35 \div 5 = 7$ b) $21 \div 3 = 7$ c) $35 \div 7 = 5$ d) $21 \div 7 = 3$

PREVIEW

Gain complete access to the largest
collection of worksheets in all subjects!

Members, please
log in to
download this
worksheet.

Not a member?
Please sign up to
gain complete
access.

www.mathworksheets4kids.com