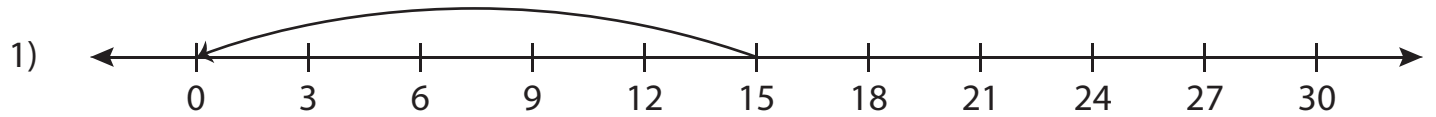


Number Line Division - MCQ

Sheet 5

Identify the correct division sentence for each number line.



- a) $15 \div 15 = 1$ b) $25 \div 5 = 5$ c) $30 \div 5 = 6$ d) $15 \div 5 = 3$



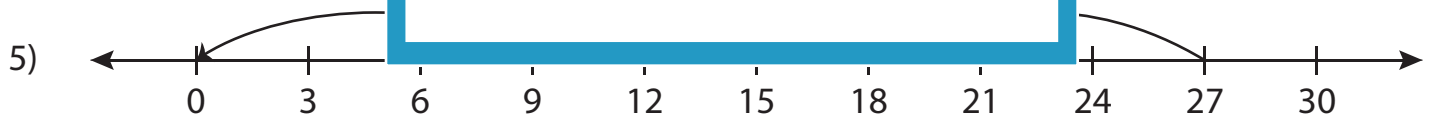
- a) $45 \div 9 = 5$ d) $50 \div 10 = 5$



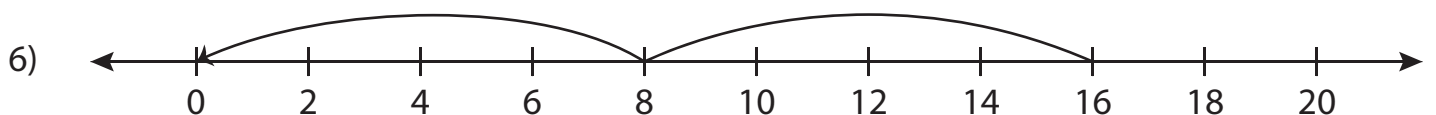
- a) $18 \div 3 = 6$ d) $36 \div 6 = 6$



- a) $40 \div 10 = 4$ d) $40 \div 5 = 8$



- a) $27 \div 3 = 9$ b) $30 \div 3 = 10$ c) $27 \div 9 = 3$ d) $18 \div 3 = 6$



- a) $16 \div 4 = 4$ b) $16 \div 8 = 2$ c) $8 \div 4 = 2$ d) $20 \div 5 = 4$

PREVIEW

Gain complete access to the largest
collection of worksheets in all subjects!

Members, please
log in to
download this
worksheet.

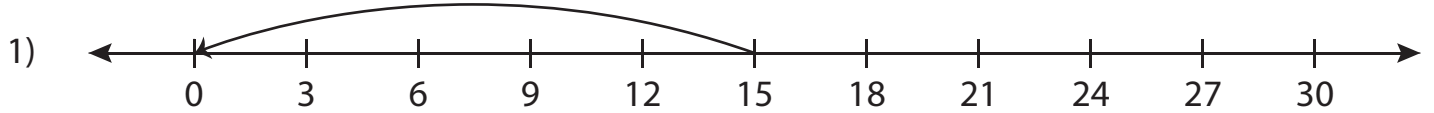
Not a member?
Please sign up to
gain complete
access.

www.mathworksheets4kids.com

Number Line Division - MCQ

Sheet 5

Identify the correct division sentence for each number line.



- a) $15 \div 15 = 1$ b) $25 \div 5 = 5$ c) $30 \div 5 = 6$ d) $15 \div 5 = 3$



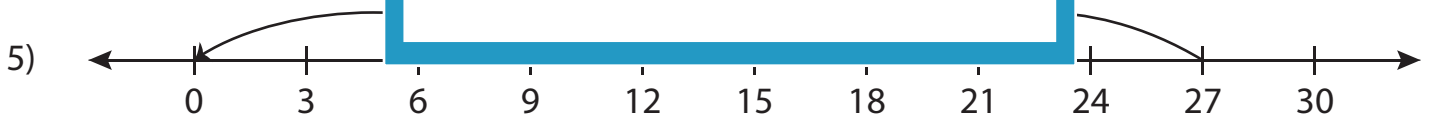
- a) $45 \div 9 = 5$ d) $50 \div 10 = 5$



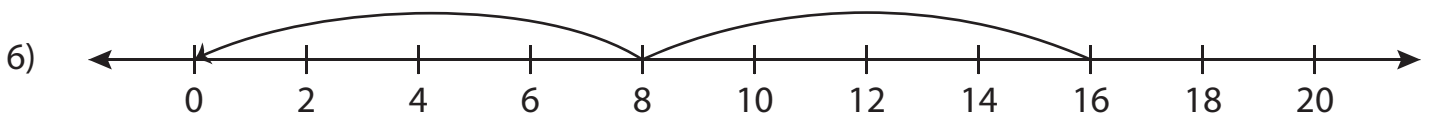
- a) $18 \div 3 = 6$ d) $36 \div 6 = 6$



- a) $40 \div 10 = 4$ d) $40 \div 5 = 8$



- a) $27 \div 3 = 9$ b) $30 \div 3 = 10$ c) $27 \div 9 = 3$ d) $18 \div 3 = 6$



- a) $16 \div 4 = 4$ b) $16 \div 8 = 2$ c) $8 \div 4 = 2$ d) $20 \div 5 = 4$

PREVIEW

Gain complete access to the largest
collection of worksheets in all subjects!

Members, please
log in to
download this
worksheet.

Not a member?
Please sign up to
gain complete
access.

www.mathworksheets4kids.com