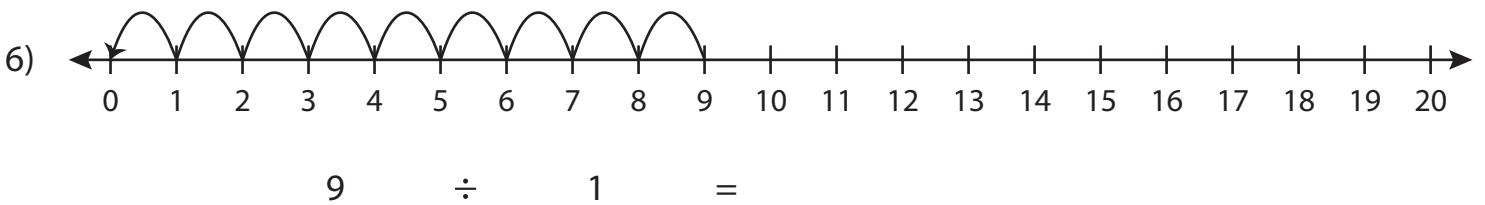
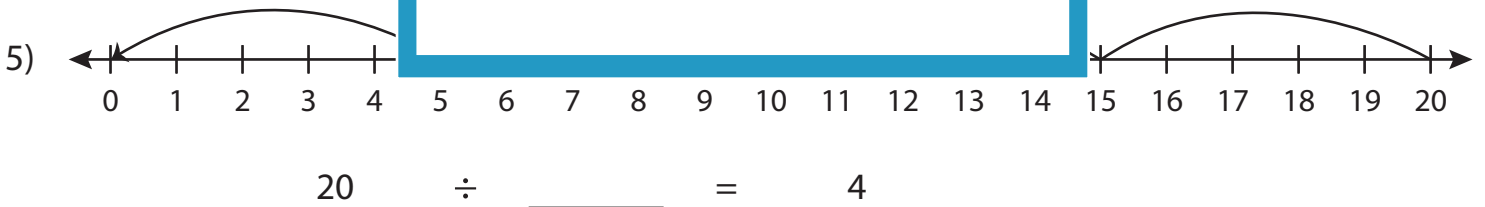
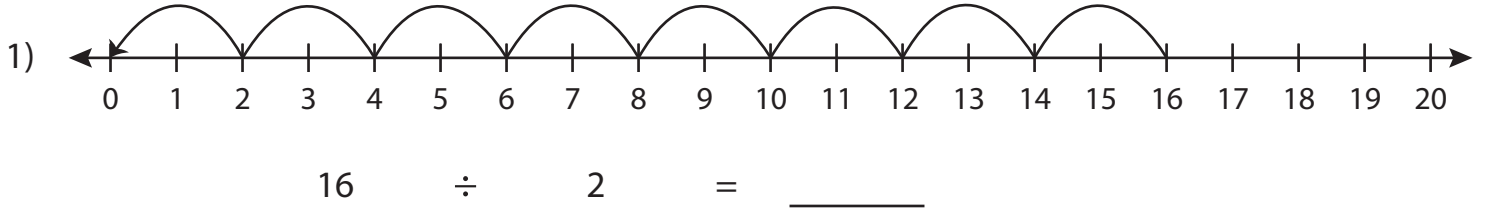


## Division Sentence - Missing Numbers

T1S3

Complete the division sentence that describes each model.



# PREVIEW

Gain complete access to the largest  
collection of worksheets in all subjects!

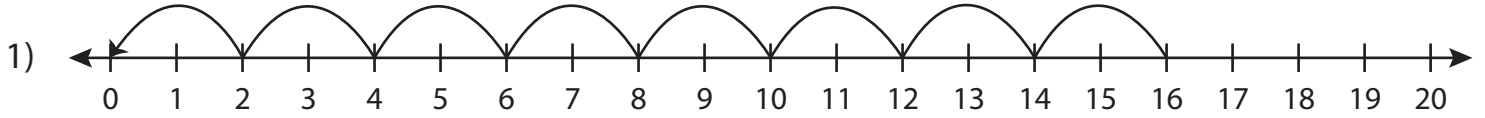
Members, please  
log in to  
download this  
worksheet.

Not a member?  
Please sign up to  
gain complete  
access.

[www.mathworksheets4kids.com](http://www.mathworksheets4kids.com)

## Division Sentence - Missing Numbers

Complete the division sentence that describes each model.



$$16 \div 2 = \underline{8}$$



6

# PREVIEW

Gain complete access to the largest collection of worksheets in all subjects!

Members, please log in to download this worksheet.

Not a member? Please sign up to gain complete access.

[www.mathworksheets4kids.com](http://www.mathworksheets4kids.com)



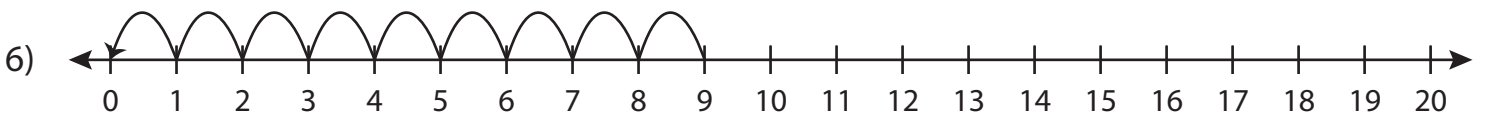
15



14



$$20 \div \underline{5} = 4$$



$$9 \div 1 = \underline{9}$$