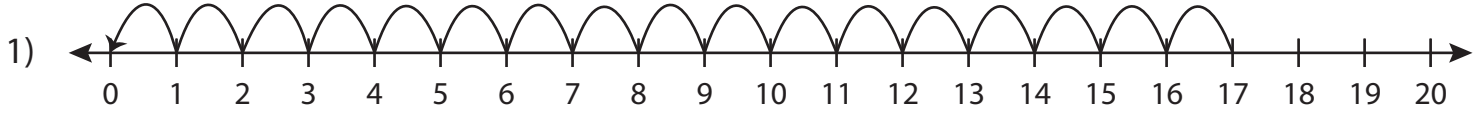


Division Sentence - Missing Numbers

T1S5

Complete the division sentence that describes each model.



$$17 \div \underline{\quad} = 17$$



PREVIEW

Gain complete access to the largest
collection of worksheets in all subjects!

Members, please
log in to
download this
worksheet.

Not a member?
Please sign up to
gain complete
access.

www.mathworksheets4kids.com



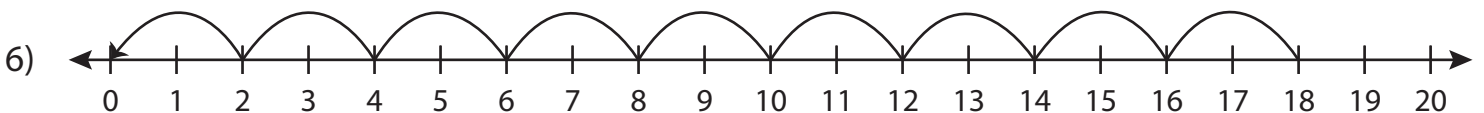
12



5



$$\underline{\quad} \div 3 = 6$$

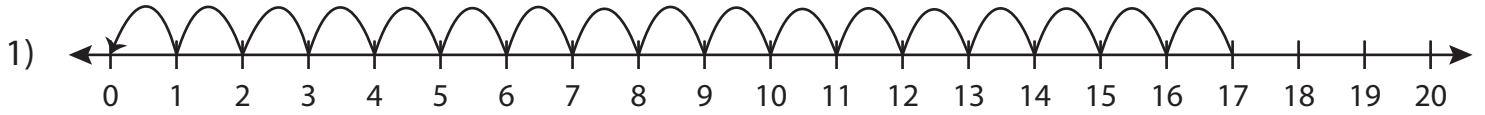


$$18 \div \underline{\quad} = 9$$

Division Sentence - Missing Numbers

T1S5

Complete the division sentence that describes each model.



$$17 \div \underline{1} = 17$$



8

PREVIEW

Gain complete access to the largest collection of worksheets in all subjects!

Members, please log in to download this worksheet.

Not a member? Please sign up to gain complete access.

www.mathworksheets4kids.com



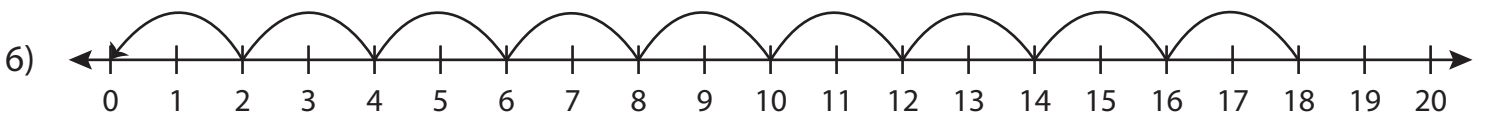
12



5



$$\underline{18} \div 3 = 6$$



$$18 \div \underline{2} = 9$$