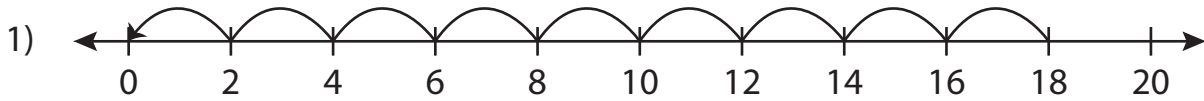


Division Sentence - Missing Numbers

T2S1

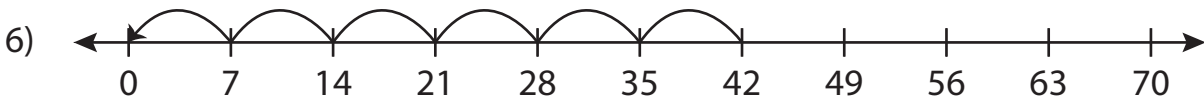
Complete the division sentence that describes each model.



$$\underline{\quad} \div 2 = 9$$



$$\underline{\quad} \div 9 = 3$$



$$42 \div 7 = \underline{\quad}$$

PREVIEW

Gain complete access to the largest collection of worksheets in all subjects!

Members, please log in to download this worksheet.

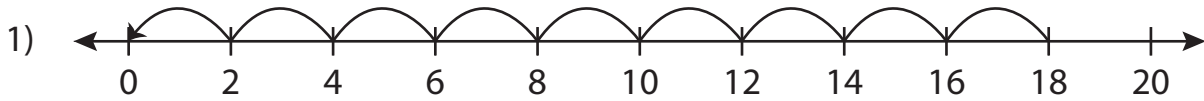
Not a member? Please sign up to gain complete access.

www.mathworksheets4kids.com

Division Sentence - Missing Numbers

T2S1

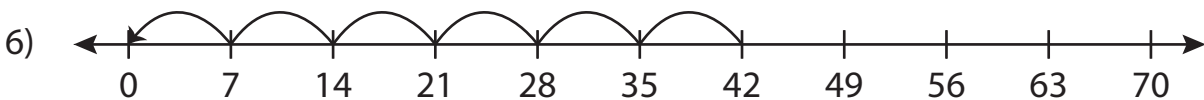
Complete the division sentence that describes each model.



$$\underline{18} \div 2 = 9$$



$$\underline{27} \div 9 = 3$$



$$42 \div 7 = \underline{6}$$

PREVIEW

Gain complete access to the largest collection of worksheets in all subjects!

Members, please log in to download this worksheet.

Not a member? Please sign up to gain complete access.

www.mathworksheets4kids.com