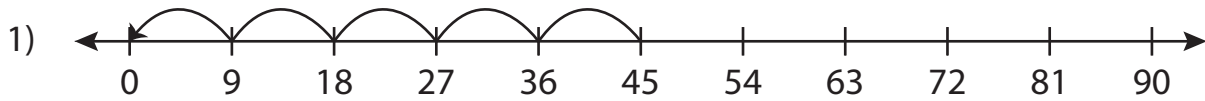


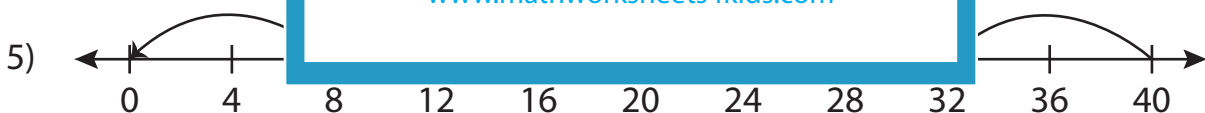
Division Sentence - Missing Numbers

T2S2

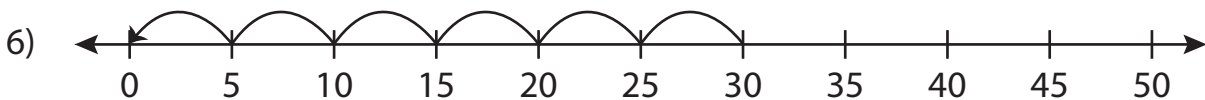
Complete the division sentence that describes each model.



$$45 \div \underline{\quad} = 5$$



$$40 \div \underline{\quad} = 5$$



$$30 \div 5 = \underline{\quad}$$

PREVIEW

Gain complete access to the largest
collection of worksheets in all subjects!

Members, please
log in to
download this
worksheet.

Not a member?
Please sign up to
gain complete
access.

www.mathworksheets4kids.com

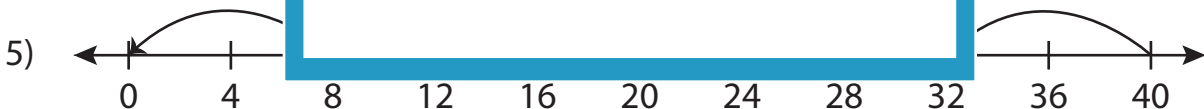
Division Sentence - Missing Numbers

T2S2

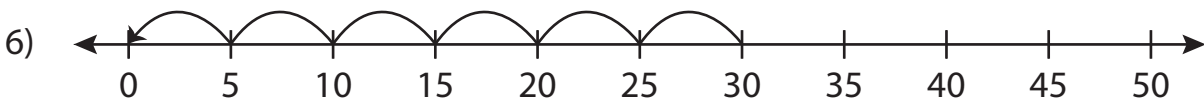
Complete the division sentence that describes each model.



$$45 \div \underline{9} = 5$$



$$40 \div \underline{8} = 5$$



$$30 \div 5 = \underline{6}$$

PREVIEW

Gain complete access to the largest collection of worksheets in all subjects!

Members, please log in to download this worksheet.

Not a member? Please sign up to gain complete access.

www.mathworksheets4kids.com