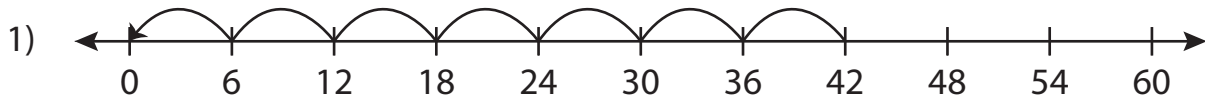


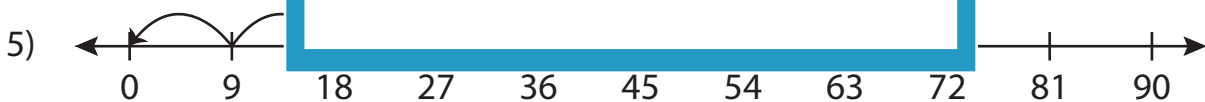
Division Sentence - Missing Numbers

T2S3

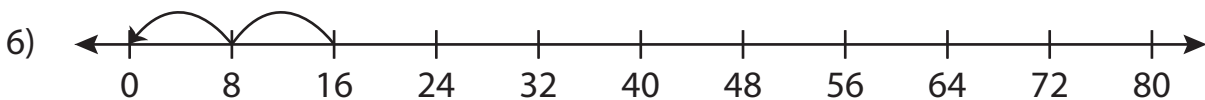
Complete the division sentence that describes each model.



$$42 \div 6 = \underline{\quad}$$



$$36 \div 9 = \underline{\quad}$$



$$16 \div \underline{\quad} = 2$$

PREVIEW

Gain complete access to the largest collection of worksheets in all subjects!

Members, please log in to download this worksheet.

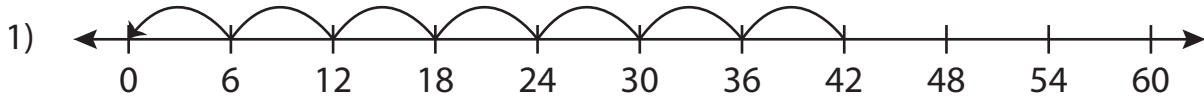
Not a member? Please sign up to gain complete access.

www.mathworksheets4kids.com

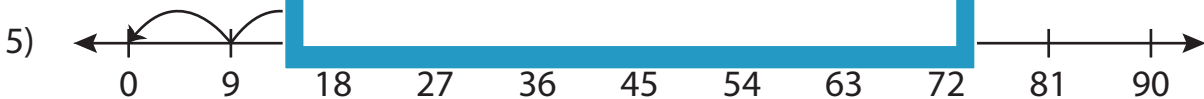
Division Sentence - Missing Numbers

T2S3

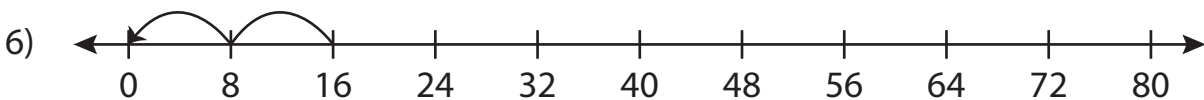
Complete the division sentence that describes each model.



$$42 \div 6 = \underline{7}$$



$$36 \div 9 = \underline{4}$$



$$16 \div \underline{8} = 2$$

PREVIEW

Gain complete access to the largest collection of worksheets in all subjects!

Members, please log in to download this worksheet.

Not a member? Please sign up to gain complete access.

www.mathworksheets4kids.com