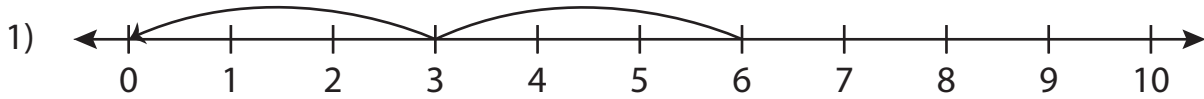


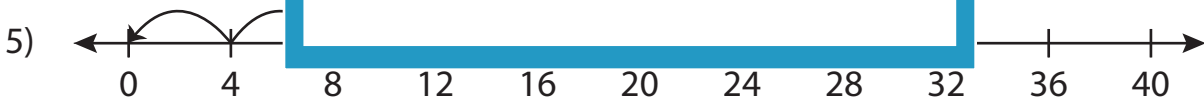
## Division Sentence - Missing Numbers

T2S4

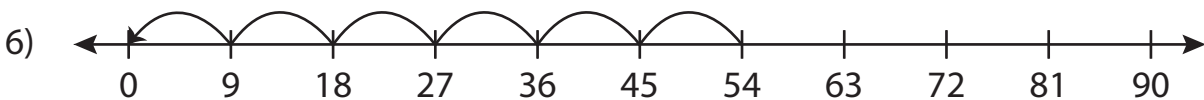
Complete the division sentence that describes each model.



$$\underline{\quad} \div 3 = 2$$



$$28 \div 4 = \underline{\quad}$$



$$54 \div \underline{\quad} = 6$$

# PREVIEW

Gain complete access to the largest  
collection of worksheets in all subjects!

Members, please  
log in to  
download this  
worksheet.

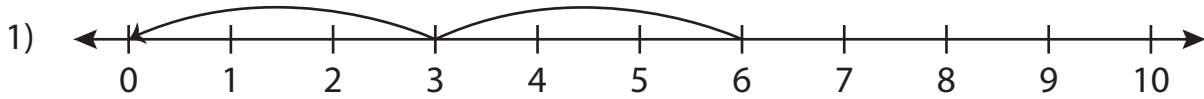
Not a member?  
Please sign up to  
gain complete  
access.

[www.mathworksheets4kids.com](http://www.mathworksheets4kids.com)

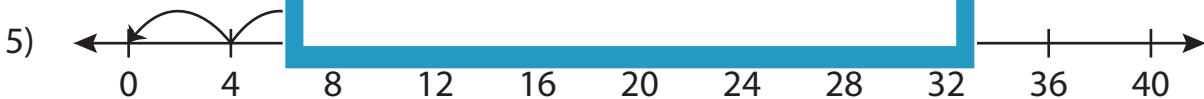
## Division Sentence - Missing Numbers

T2S4

Complete the division sentence that describes each model.



$$\underline{6} \div 3 = 2$$



$$28 \div 4 = \underline{7}$$



$$54 \div \underline{9} = 6$$

**PREVIEW**

Gain complete access to the largest collection of worksheets in all subjects!

Members, please log in to download this worksheet.

Not a member? Please sign up to gain complete access.

[www.mathworksheets4kids.com](http://www.mathworksheets4kids.com)