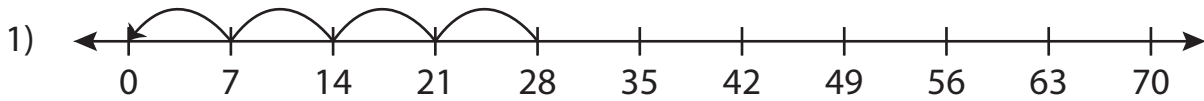


Division Sentence - Missing Numbers

T2S5

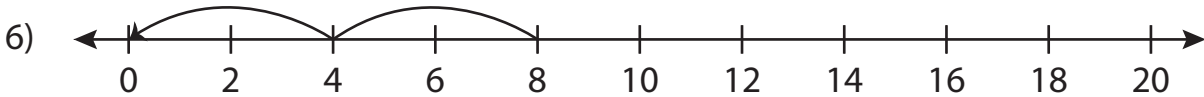
Complete the division sentence that describes each model.



$$28 \div \underline{\quad} = 4$$



$$\underline{\quad} \div 6 = 3$$



$$8 \div \underline{\quad} = 2$$

PREVIEW

Gain complete access to the largest collection of worksheets in all subjects!

Members, please log in to download this worksheet.

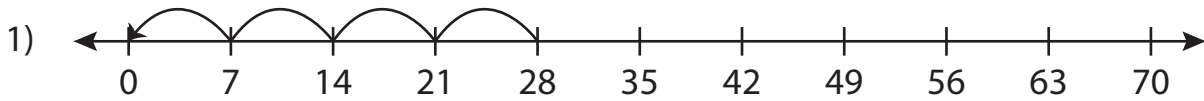
Not a member? Please sign up to gain complete access.

www.mathworksheets4kids.com

Division Sentence - Missing Numbers

T2S5

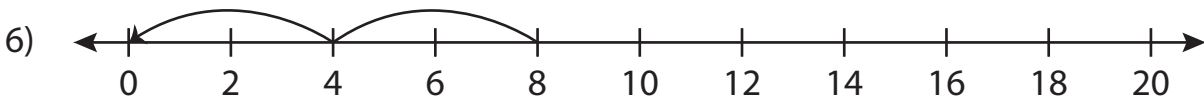
Complete the division sentence that describes each model.



$$28 \div \underline{7} = 4$$



$$\underline{18} \div 6 = 3$$



$$8 \div \underline{4} = 2$$

PREVIEW

Gain complete access to the largest collection of worksheets in all subjects!

Members, please log in to download this worksheet.

Not a member? Please sign up to gain complete access.

www.mathworksheets4kids.com