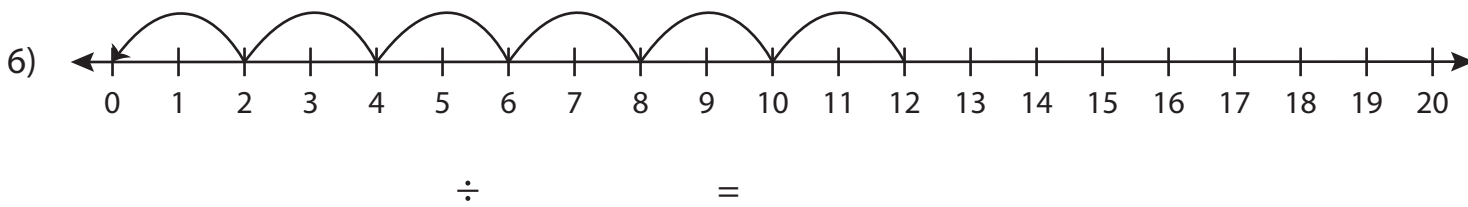
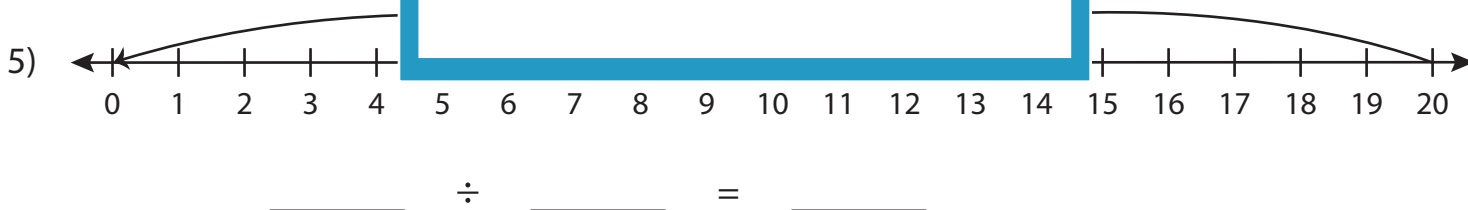
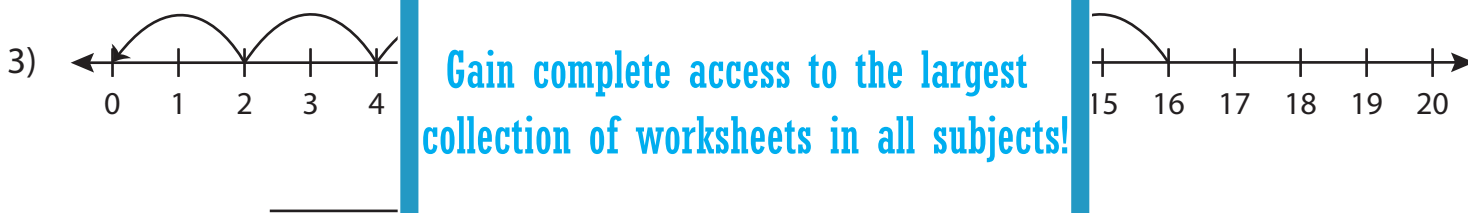
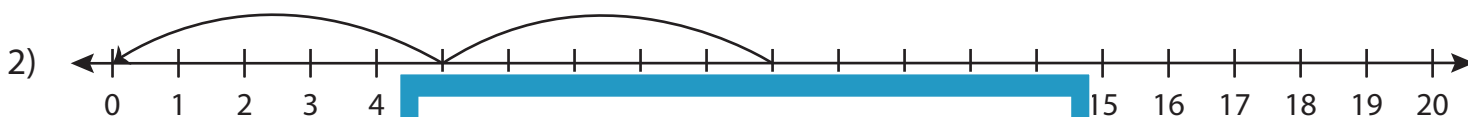
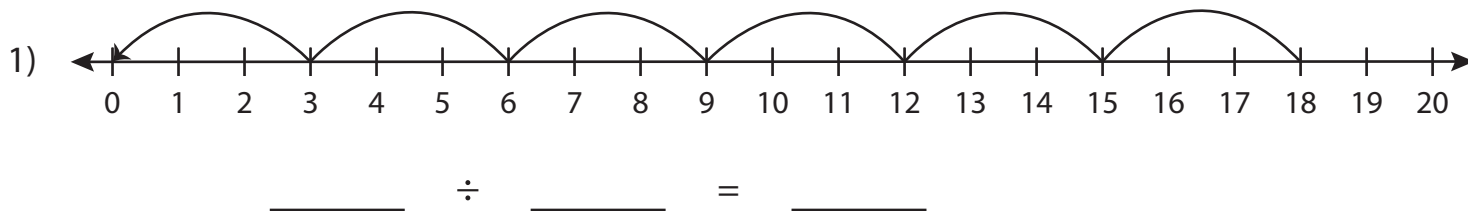


# Division Sentence

T1S4

Write the division sentence that describes each model.



# PREVIEW

Gain complete access to the largest  
collection of worksheets in all subjects!

Members, please  
log in to  
download this  
worksheet.

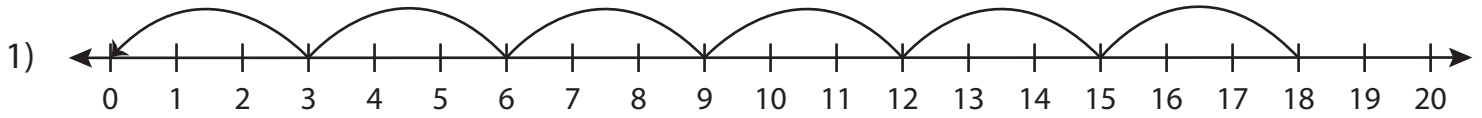
Not a member?  
Please sign up to  
gain complete  
access.

[www.mathworksheets4kids.com](http://www.mathworksheets4kids.com)

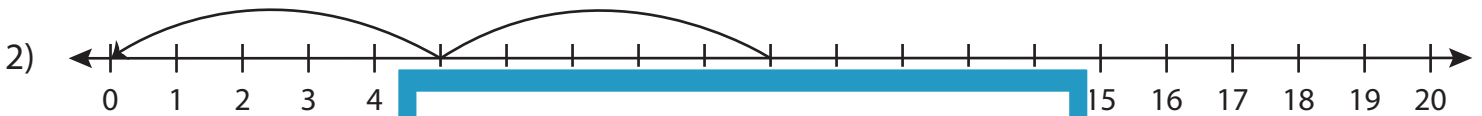
# Division Sentence

T1S4

Write the division sentence that describes each model.



$$\underline{18} \div \underline{3} = \underline{6}$$



$$\underline{10}$$

# PREVIEW

Gain complete access to the largest collection of worksheets in all subjects!

Members, please log in to download this worksheet.

Not a member? Please sign up to gain complete access.

[www.mathworksheets4kids.com](http://www.mathworksheets4kids.com)



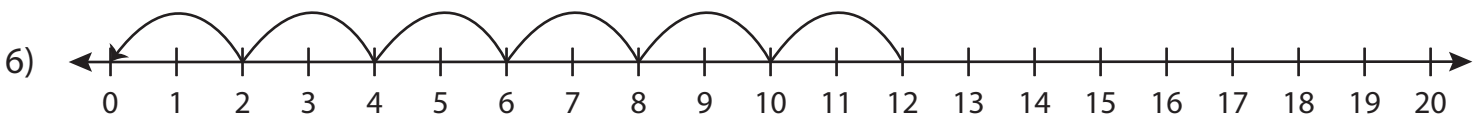
$$\underline{16}$$



$$\underline{4}$$



$$\underline{20} \div \underline{10} = \underline{2}$$



$$\underline{12} \div \underline{2} = \underline{6}$$