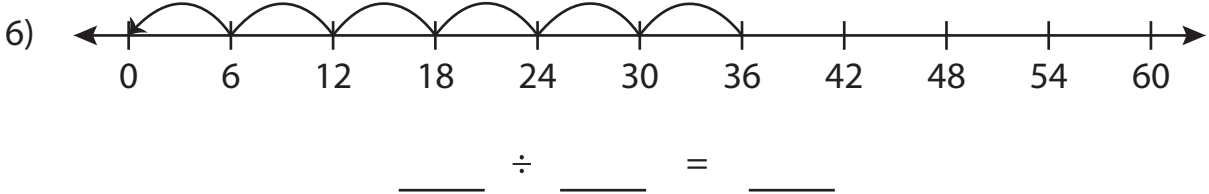
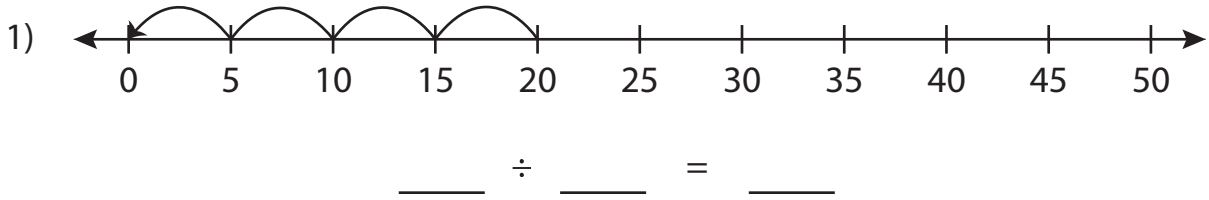


Division Sentence

T2S2

Write the division sentence that describes each model.



PREVIEW

Gain complete access to the largest collection of worksheets in all subjects!

Members, please log in to download this worksheet.

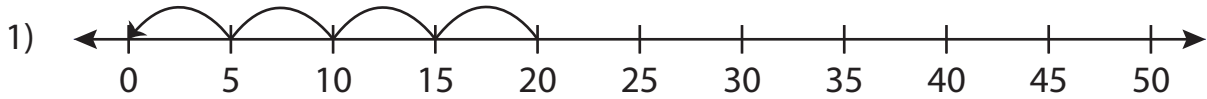
Not a member? Please sign up to gain complete access.

www.mathworksheets4kids.com

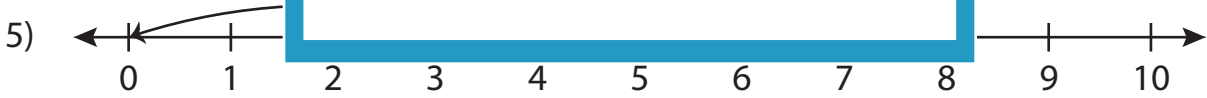
Division Sentence

T2S2

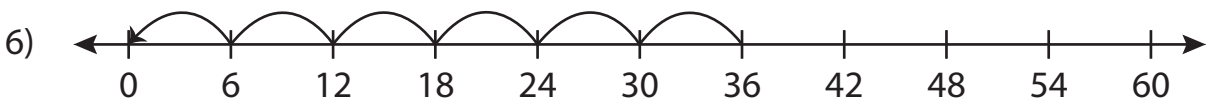
Write the division sentence that describes each model.



$$\underline{20} \div \underline{5} = \underline{4}$$



$$\underline{8} \div \underline{4} = \underline{2}$$



$$\underline{36} \div \underline{6} = \underline{6}$$

PREVIEW

Gain complete access to the largest collection of worksheets in all subjects!

Members, please log in to download this worksheet.

Not a member? Please sign up to gain complete access.

www.mathworksheets4kids.com