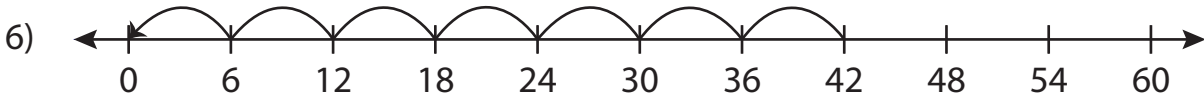
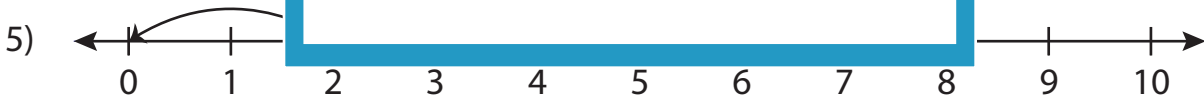
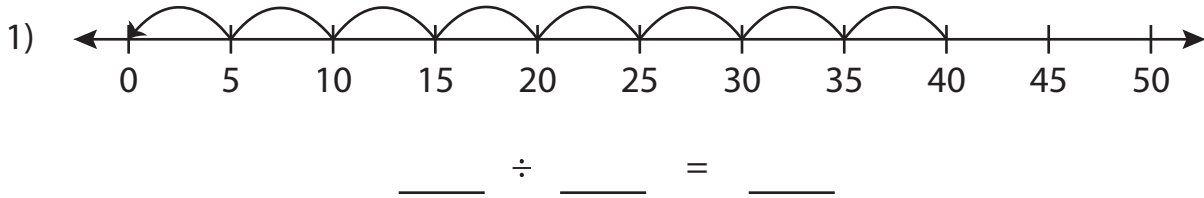


Division Sentence

T2S4

Write the division sentence that describes each model.



_____ ÷ _____ = _____

PREVIEW

Gain complete access to the largest collection of worksheets in all subjects!

Members, please log in to download this worksheet.

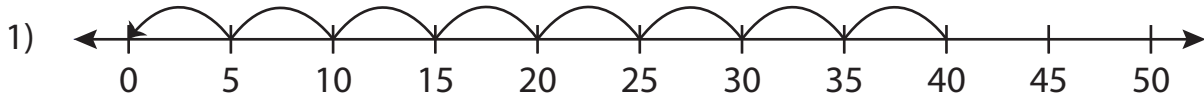
Not a member? Please sign up to gain complete access.

www.mathworksheets4kids.com

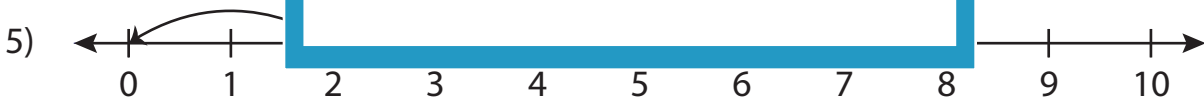
Division Sentence

T2S4

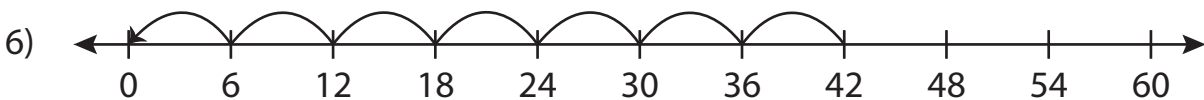
Write the division sentence that describes each model.



$$\underline{40} \div \underline{5} = \underline{8}$$



$$\underline{8} \div \underline{2} = \underline{4}$$



$$\underline{42} \div \underline{6} = \underline{7}$$

PREVIEW

Gain complete access to the largest collection of worksheets in all subjects!

Members, please log in to download this worksheet.

Not a member? Please sign up to gain complete access.

www.mathworksheets4kids.com