

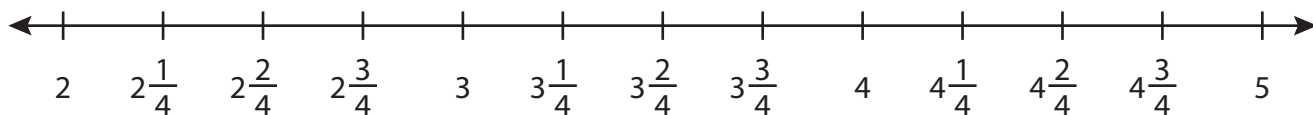
Name : _____

Addition using Number Line

3addends-mixed: S1

Indicate hops on each number line and complete the addition sentences.

1) $2\frac{1}{4} + 1\frac{1}{4} + 1\frac{1}{4} =$ _____



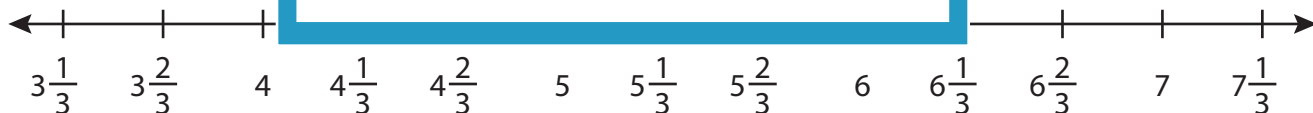
2) $5\frac{1}{2} + 1\frac{1}{2}$



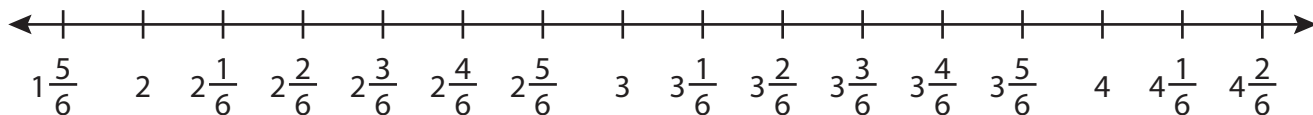
3) $7\frac{1}{5} + 1\frac{2}{5}$



4) $3\frac{1}{3} + 2\frac{1}{3}$



5) $1\frac{5}{6} + 1\frac{2}{6} + 1\frac{1}{6} =$ _____



PREVIEW

Gain complete access to the largest collection of worksheets in all subjects!

Members, please log in to download this worksheet.

Not a member? Please sign up to gain complete access.

www.mathworksheets4kids.com

Name : _____

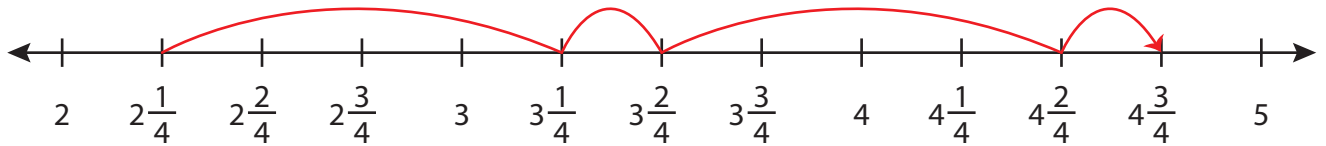
Answer key

Addition using Number Line

3addends-mixed: S1

Indicate hops on each number line and complete the addition sentences.

1) $2\frac{1}{4} + 1\frac{1}{4} + 1\frac{1}{4} = \underline{4\frac{3}{4}}$



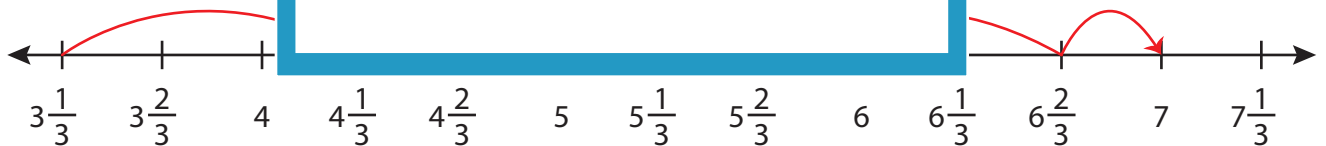
2) $5\frac{1}{2} + 1\frac{1}{2}$



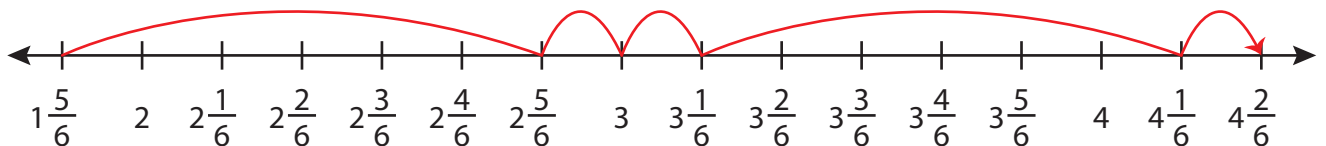
3) $7\frac{1}{5} + 1\frac{2}{5}$



4) $3\frac{1}{3} + 2\frac{1}{3}$



5) $1\frac{5}{6} + 1\frac{2}{6} + 1\frac{1}{6} = \underline{4\frac{2}{6} = 4\frac{1}{3}}$



PREVIEW

Gain complete access to the largest collection of worksheets in all subjects!

Members, please log in to download this worksheet.

Not a member? Please sign up to gain complete access.

www.mathworksheets4kids.com