

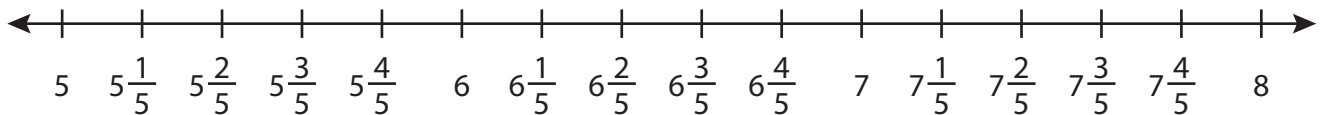
Name : _____

Addition using Number Line

3addends-mixed: S4

Indicate hops on each number line and complete the addition sentences.

1) $5\frac{1}{5} + 1\frac{1}{5} + 1\frac{3}{5} =$ _____



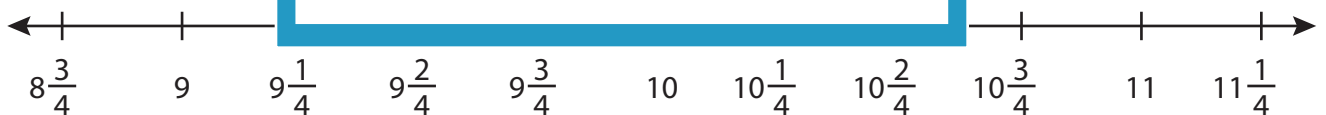
2) $3\frac{1}{4} + 1\frac{1}{4}$



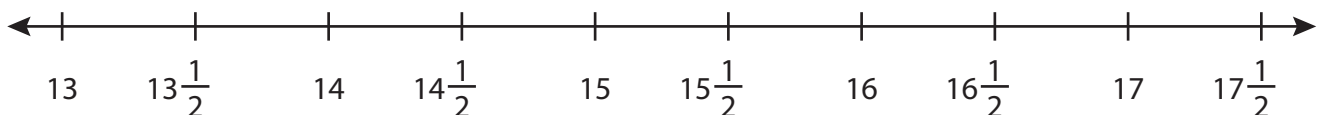
3) $6\frac{1}{3} + 1\frac{1}{3}$



4) $8\frac{3}{4} + 1\frac{1}{4}$



5) $13\frac{1}{2} + 1\frac{1}{2} + 1\frac{1}{2} =$ _____



PREVIEW

Gain complete access to the largest collection of worksheets in all subjects!

Members, please log in to download this worksheet.

Not a member? Please sign up to gain complete access.

www.mathworksheets4kids.com

Name : _____

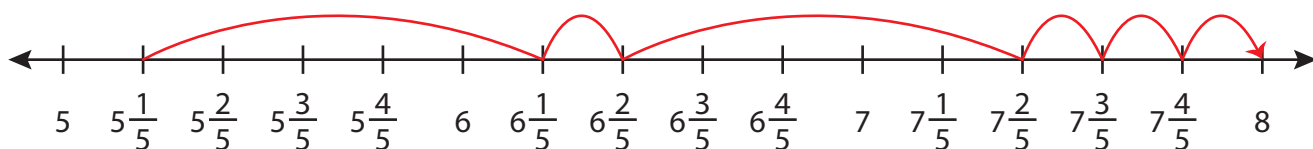
Answer key

Addition using Number Line

3addends-mixed: S4

Indicate hops on each number line and complete the addition sentences.

1) $5\frac{1}{5} + 1\frac{1}{5} + 1\frac{3}{5} = \underline{\hspace{2cm}} \mathbf{8}$



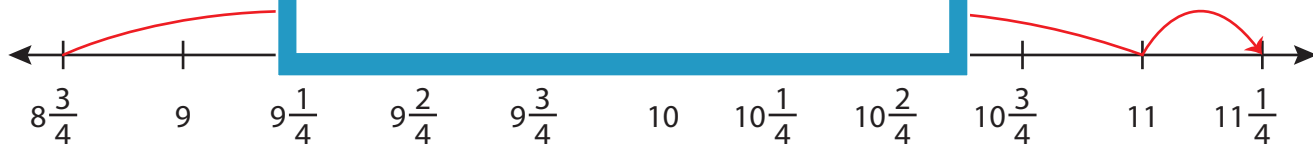
2) $3\frac{1}{4} + 1\frac{1}{4}$



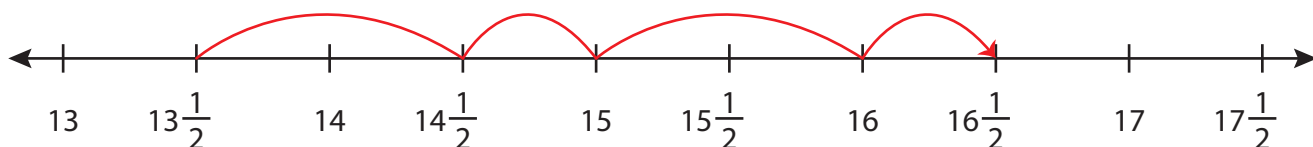
3) $6\frac{1}{3} + 1\frac{1}{3}$



4) $8\frac{3}{4} + 1\frac{1}{4}$



5) $13\frac{1}{2} + 1\frac{1}{2} + 1\frac{1}{2} = \underline{\hspace{2cm}} \mathbf{16\frac{1}{2}}$



PREVIEW

Gain complete access to the largest collection of worksheets in all subjects!

Members, please log in to download this worksheet.

Not a member? Please sign up to gain complete access.

www.mathworksheets4kids.com