

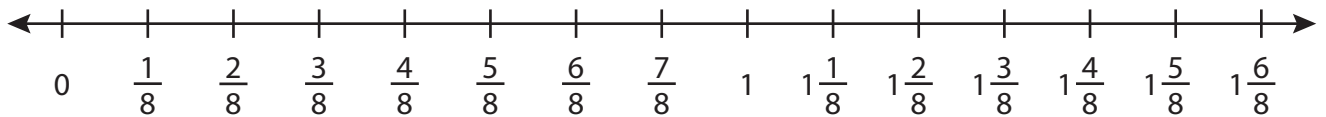
Name : \_\_\_\_\_

## Addition using Number Line

3addends: T1S4

Indicate hops on each number line and complete the addition sentences.

1)  $\frac{1}{8} + 1\frac{2}{8} + \frac{2}{8} =$  \_\_\_\_\_



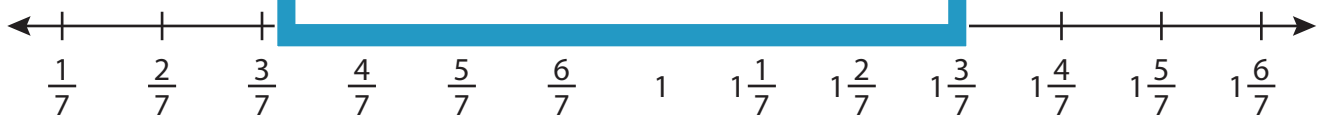
2)  $\frac{7}{13} + \frac{5}{13}$



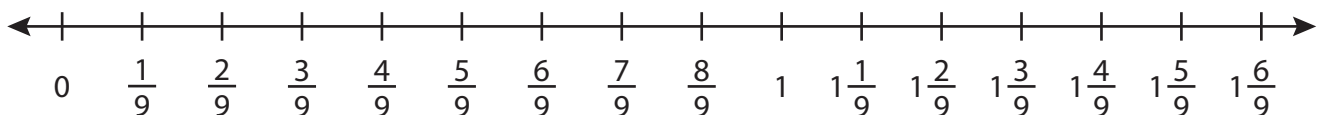
3)  $\frac{1}{2} + 3\frac{1}{2}$



4)  $\frac{1}{7} + \frac{1}{7}$



5)  $\frac{2}{9} + 1\frac{1}{9} + \frac{1}{9} =$  \_\_\_\_\_



# PREVIEW

Gain complete access to the largest collection of worksheets in all subjects!

Members, please log in to download this worksheet.

Not a member? Please sign up to gain complete access.

[www.mathworksheets4kids.com](http://www.mathworksheets4kids.com)

Name : \_\_\_\_\_

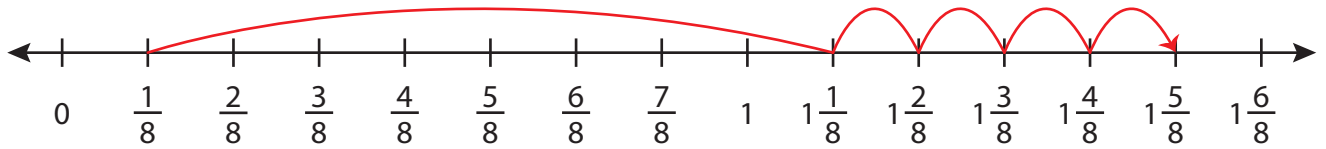
## Answer key

### Addition using Number Line

3addends: T1S4

Indicate hops on each number line and complete the addition sentences.

1)  $\frac{1}{8} + 1\frac{2}{8} + \frac{2}{8} = \underline{1\frac{5}{8}}$



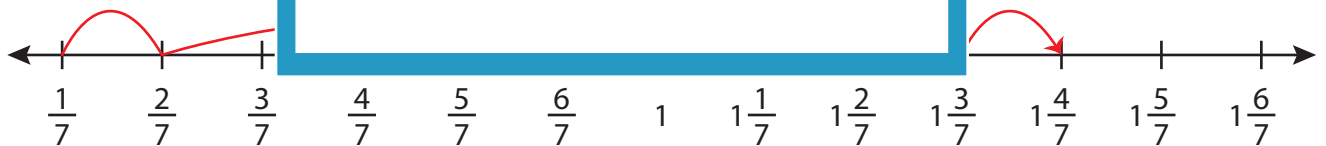
2)  $\frac{7}{13} + \frac{5}{13}$



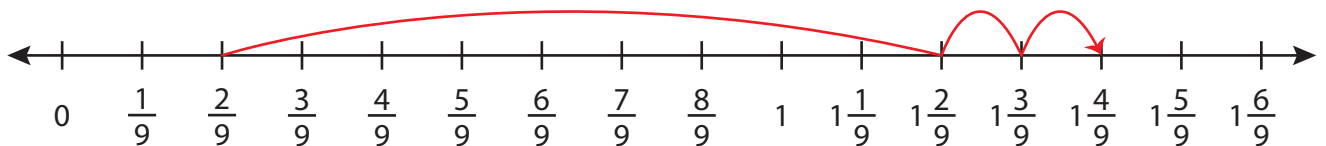
3)  $\frac{1}{2} + 3\frac{1}{2}$



4)  $\frac{1}{7} + \frac{1}{7}$



5)  $\frac{2}{9} + 1\frac{1}{9} + \frac{1}{9} = \underline{1\frac{4}{9}}$



# PREVIEW

Gain complete access to the largest collection of worksheets in all subjects!

Members, please log in to download this worksheet.

Not a member? Please sign up to gain complete access.

[www.mathworksheets4kids.com](http://www.mathworksheets4kids.com)