

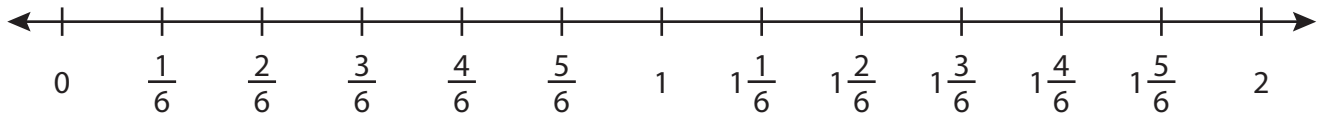
Name : _____

Addition using Number Line

3addends: T1S5

Indicate hops on each number line and complete the addition sentences.

1) $\frac{3}{6} + 1\frac{1}{6} + \frac{1}{6} =$ _____



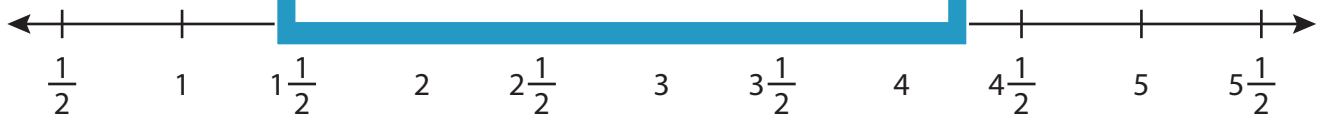
2) $\frac{1}{8} + \frac{3}{8}$



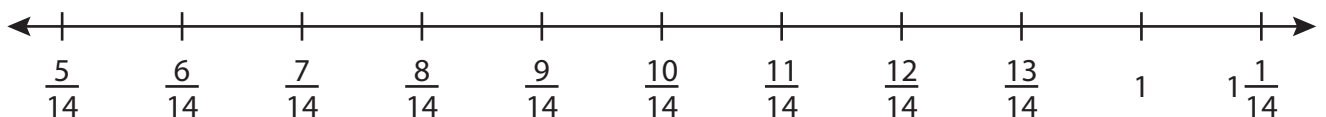
3) $\frac{3}{4} + \frac{2}{4}$



4) $\frac{1}{2} + 1\frac{1}{2}$



5) $\frac{5}{14} + \frac{4}{14} + \frac{6}{14} =$ _____



PREVIEW

Gain complete access to the largest collection of worksheets in all subjects!

Members, please log in to download this worksheet.

Not a member? Please sign up to gain complete access.

www.mathworksheets4kids.com

Name : _____

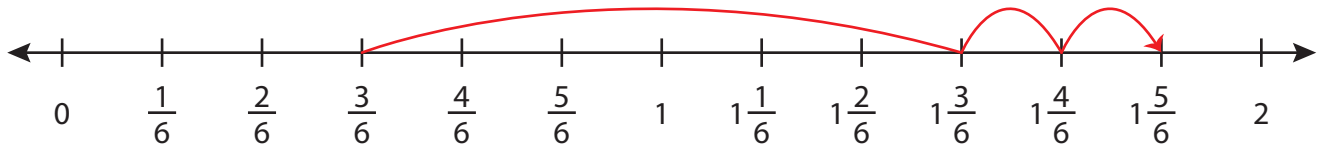
Answer key

Addition using Number Line

3addends: T1S5

Indicate hops on each number line and complete the addition sentences.

1) $\frac{3}{6} + 1\frac{1}{6} + \frac{1}{6} = \underline{1\frac{5}{6}}$



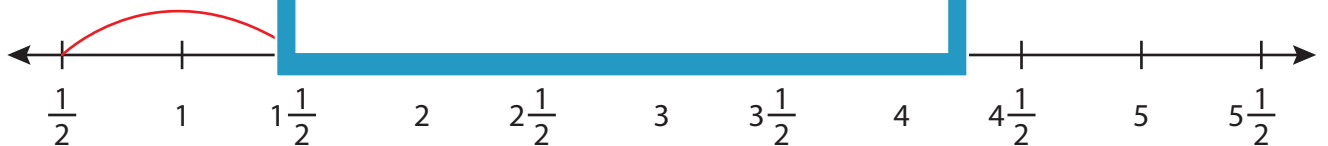
2) $\frac{1}{8} + \frac{3}{8}$



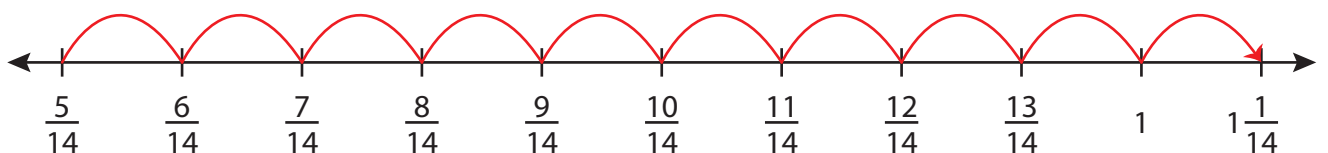
3) $\frac{3}{4} + \frac{2}{4}$



4) $\frac{1}{2} + 1\frac{1}{2}$



5) $\frac{5}{14} + \frac{4}{14} + \frac{6}{14} = \underline{1\frac{1}{14}}$



PREVIEW

Gain complete access to the largest collection of worksheets in all subjects!

Members, please log in to download this worksheet.

Not a member? Please sign up to gain complete access.

www.mathworksheets4kids.com