

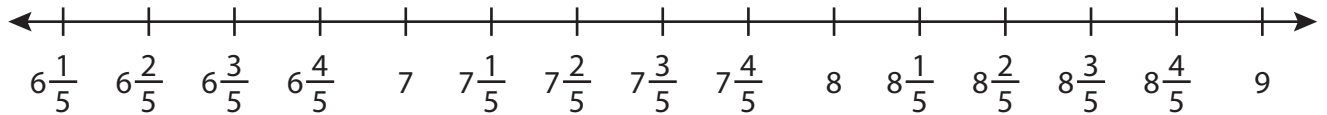
Name : \_\_\_\_\_

## Addition using Number Line

3addends: T2S2

Indicate hops on each number line and complete the addition sentences.

1)  $6\frac{1}{5} + 1\frac{2}{5} + 1\frac{1}{5} =$  \_\_\_\_\_



2)  $1\frac{2}{13} + \frac{2}{13} +$  \_\_\_\_\_



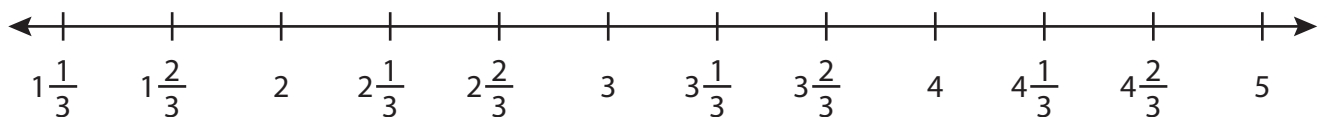
3)  $\frac{4}{12} + \frac{3}{12} +$  \_\_\_\_\_



4)  $\frac{2}{7} + \frac{1}{7} +$  \_\_\_\_\_



5)  $2\frac{1}{3} + 1\frac{1}{3} + \frac{1}{3} =$  \_\_\_\_\_



# PREVIEW

Gain complete access to the largest collection of worksheets in all subjects!

Members, please log in to download this worksheet.

Not a member? Please sign up to gain complete access.

[www.mathworksheets4kids.com](http://www.mathworksheets4kids.com)

Name : \_\_\_\_\_

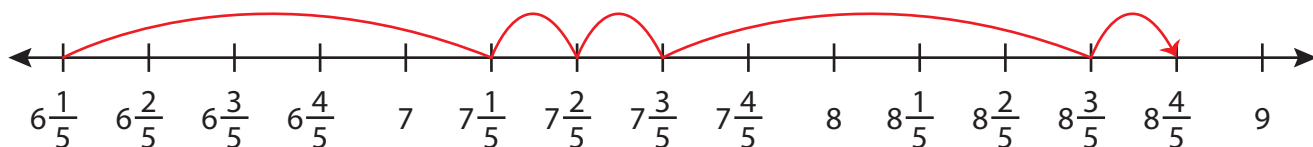
## Answer key

### Addition using Number Line

3addends: T2S2

Indicate hops on each number line and complete the addition sentences.

1)  $6\frac{1}{5} + 1\frac{2}{5} + 1\frac{1}{5} = \underline{8\frac{4}{5}}$



2)  $1\frac{2}{13} + \frac{2}{13} +$



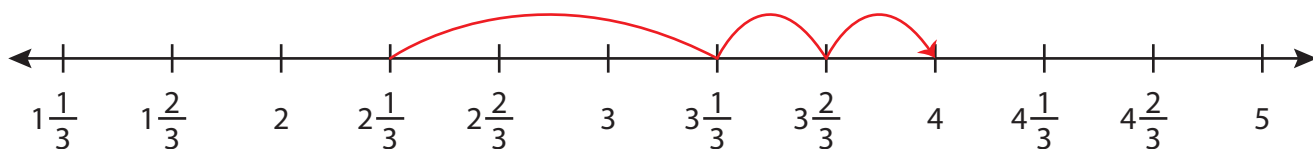
3)  $\frac{4}{12} + \frac{3}{12} +$



4)  $\frac{2}{7} + \frac{1}{7} +$



5)  $2\frac{1}{3} + 1\frac{1}{3} + \frac{1}{3} = \underline{4}$



# PREVIEW

Gain complete access to the largest collection of worksheets in all subjects!

Members, please log in to download this worksheet.

Not a member? Please sign up to gain complete access.

[www.mathworksheets4kids.com](http://www.mathworksheets4kids.com)