

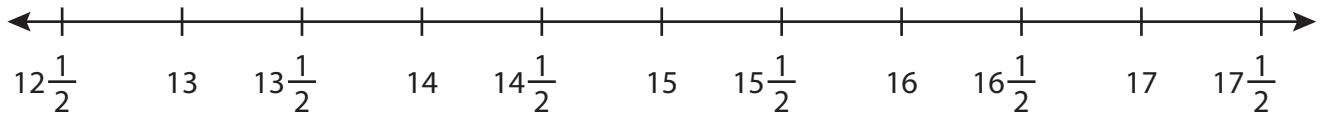
Name : _____

Addition using Number Line

3addends: T2S4

Indicate hops on each number line and complete the addition sentences.

1) $13\frac{1}{2} + \frac{1}{2} + \frac{1}{2} =$ _____



2) $\frac{2}{10} + \frac{2}{10} +$ _____



3) $7\frac{1}{3} + 1\frac{1}{3} +$ _____



4) $\frac{11}{15} + \frac{2}{15} +$ _____



5) $\frac{3}{7} + \frac{1}{7} + \frac{2}{7} =$ _____



PREVIEW

Gain complete access to the largest collection of worksheets in all subjects!

Members, please log in to download this worksheet.

Not a member? Please sign up to gain complete access.

www.mathworksheets4kids.com

Name : _____

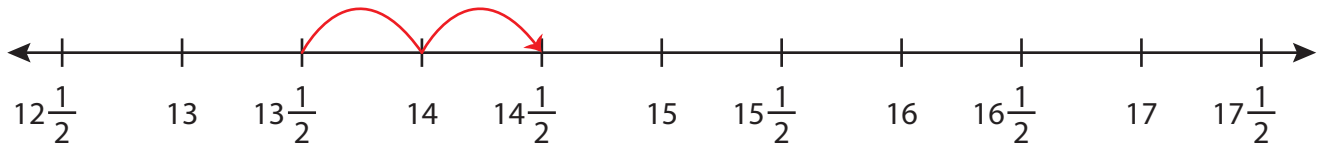
Answer key

Addition using Number Line

3addends: T2S4

Indicate hops on each number line and complete the addition sentences.

1) $13\frac{1}{2} + \frac{1}{2} + \frac{1}{2} = \underline{14\frac{1}{2}}$



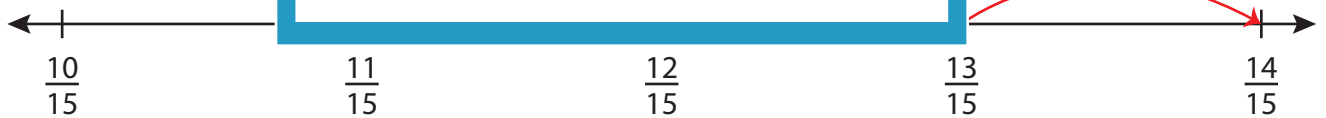
2) $\frac{2}{10} + \frac{2}{10} +$



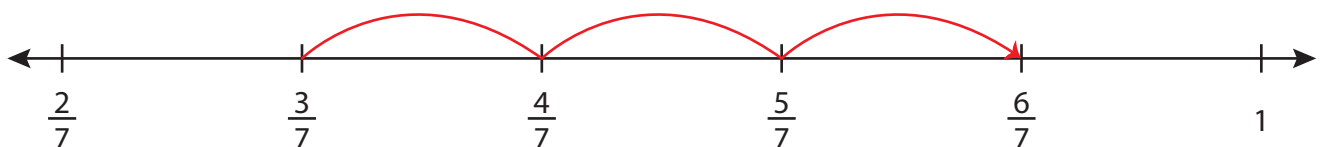
3) $7\frac{1}{3} + 1\frac{1}{3} +$



4) $\frac{11}{15} + \frac{2}{15} +$



5) $\frac{3}{7} + \frac{1}{7} + \frac{2}{7} = \underline{\frac{6}{7}}$



PREVIEW

Gain complete access to the largest collection of worksheets in all subjects!

Members, please log in to download this worksheet.

Not a member? Please sign up to gain complete access.

www.mathworksheets4kids.com