

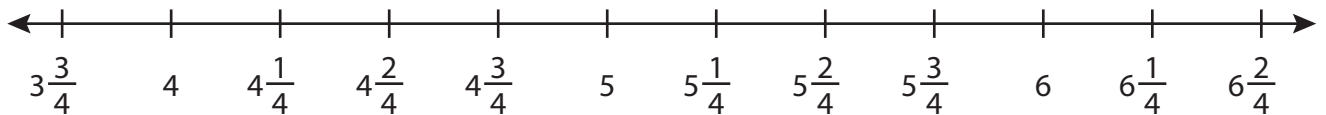
Name : _____

Addition using Number Line

Mixed Numbers: S1

Indicate hops on each number line and complete the addition sentences.

1) $3\frac{3}{4} + 2\frac{3}{4} =$ _____



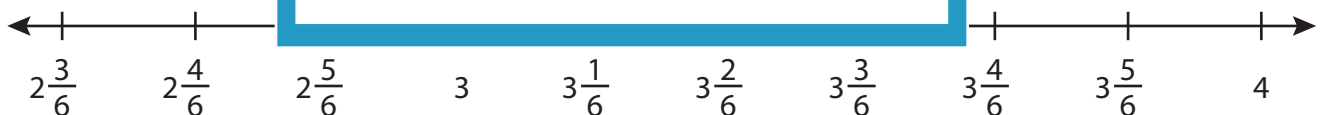
2) $1\frac{8}{10} + 1\frac{1}{10} =$



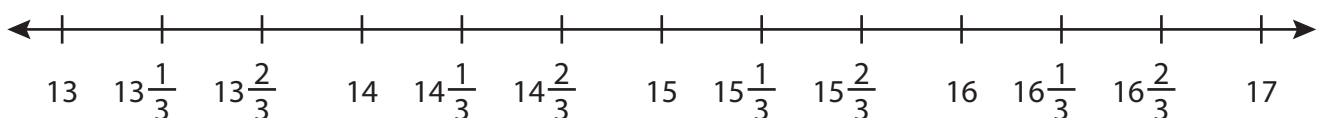
3) $4\frac{1}{2} + 5\frac{1}{2} =$



4) $2\frac{3}{6} + 1\frac{2}{6} =$



5) $13\frac{2}{3} + 3\frac{1}{3} =$ _____



PREVIEW

Gain complete access to the largest collection of worksheets in all subjects!

Members, please log in to download this worksheet.

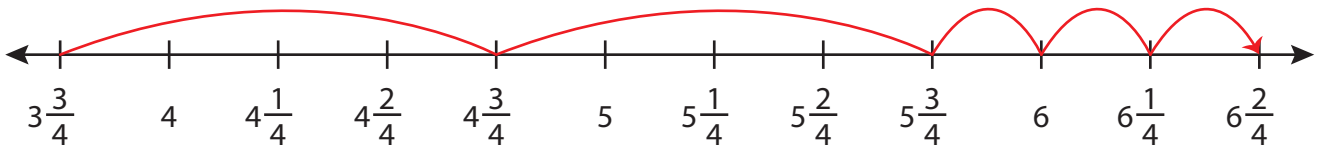
Not a member? Please sign up to gain complete access.

www.mathworksheets4kids.com

Addition using Number Line

Indicate hops on each number line and complete the addition sentences.

1) $3\frac{3}{4} + 2\frac{3}{4} = \underline{6\frac{2}{4} = 6\frac{1}{2}}$



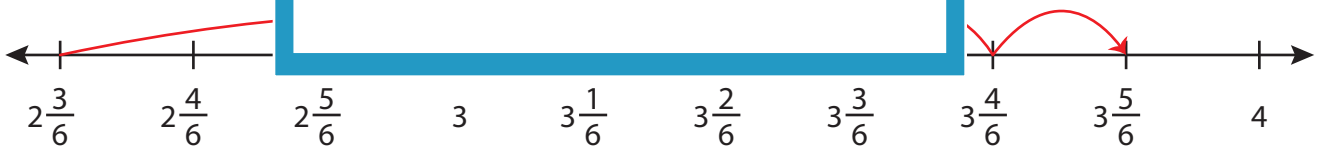
2) $1\frac{8}{10} + 1\frac{1}{10} =$



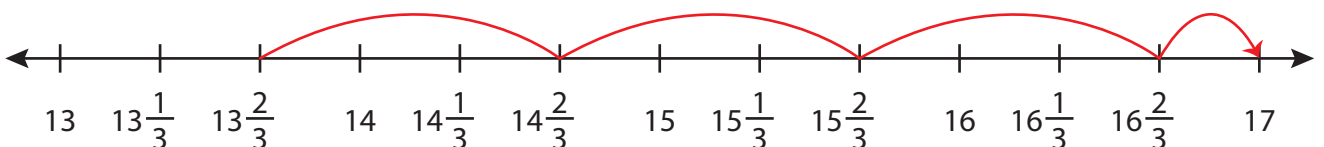
3) $4\frac{1}{2} + 5\frac{1}{2} =$



4) $2\frac{3}{6} + 1\frac{2}{6} =$



5) $13\frac{2}{3} + 3\frac{1}{3} = \underline{17}$

**PREVIEW**

Gain complete access to the largest collection of worksheets in all subjects!

Members, please log in to download this worksheet.

Not a member? Please sign up to gain complete access.

www.mathworksheets4kids.com