

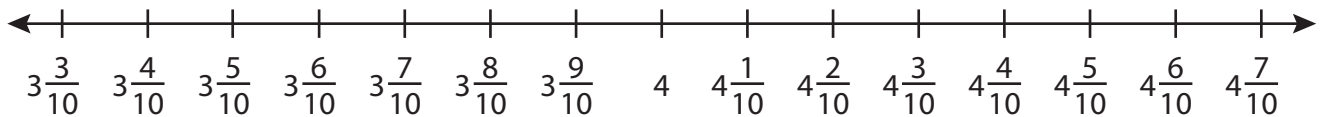
Name : \_\_\_\_\_

## Addition using Number Line

Mixed Numbers: S3

Indicate hops on each number line and complete the addition sentences.

1)  $3\frac{4}{10} + 1\frac{2}{10} =$  \_\_\_\_\_



2)  $6\frac{2}{5} + 1\frac{2}{5} =$  \_\_\_\_\_



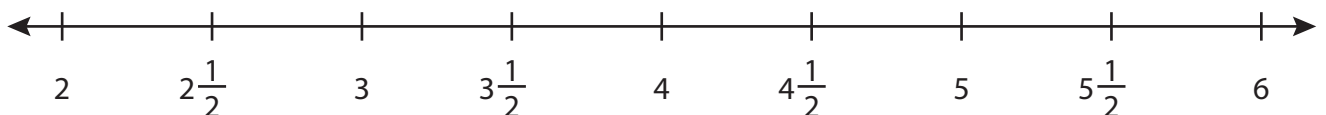
3)  $8\frac{2}{4} + 2\frac{1}{4} =$  \_\_\_\_\_



4)  $1\frac{1}{8} + 1\frac{4}{8} =$  \_\_\_\_\_



5)  $2\frac{1}{2} + 1\frac{1}{2} =$  \_\_\_\_\_



# PREVIEW

Gain complete access to the largest collection of worksheets in all subjects!

Members, please log in to download this worksheet.

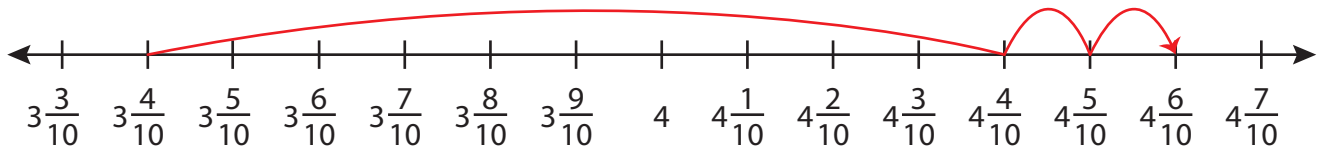
Not a member? Please sign up to gain complete access.

[www.mathworksheets4kids.com](http://www.mathworksheets4kids.com)

**Addition using Number Line**

Indicate hops on each number line and complete the addition sentences.

1)  $3\frac{4}{10} + 1\frac{2}{10} = \underline{4\frac{6}{10} = 4\frac{3}{5}}$



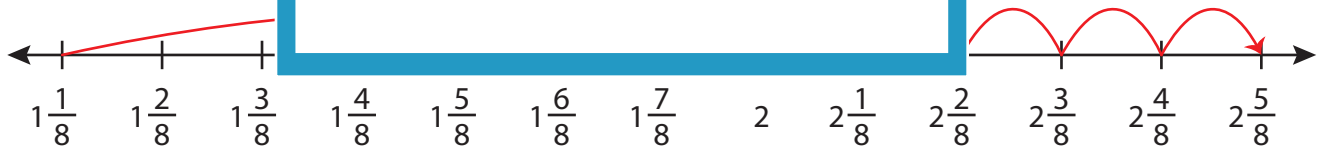
2)  $6\frac{2}{5} + 1\frac{2}{5} =$



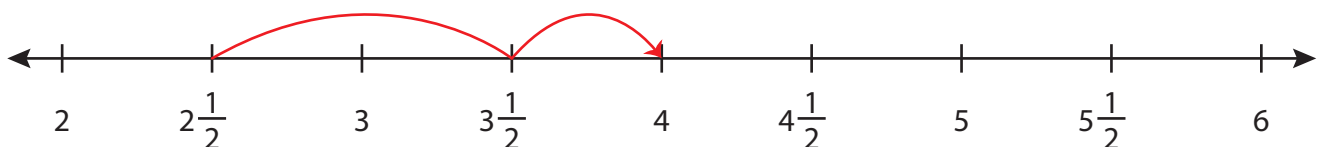
3)  $8\frac{2}{4} + 2\frac{1}{4} =$



4)  $1\frac{1}{8} + 1\frac{4}{8} =$



5)  $2\frac{1}{2} + 1\frac{1}{2} = \underline{4}$

**PREVIEW**

Gain complete access to the largest collection of worksheets in all subjects!

Members, please log in to download this worksheet.

Not a member? Please sign up to gain complete access.

[www.mathworksheets4kids.com](http://www.mathworksheets4kids.com)