

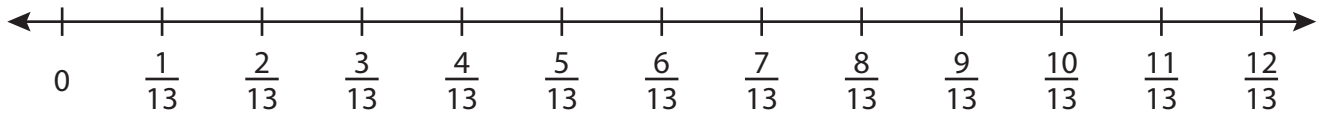
Name : _____

Addition using Number Line

Proper Fractions: S3

Indicate hops on each number line and complete the addition sentences.

1) $\frac{3}{13} + \frac{8}{13} =$ _____



2) $\frac{2}{7} + \frac{3}{7} =$ _____



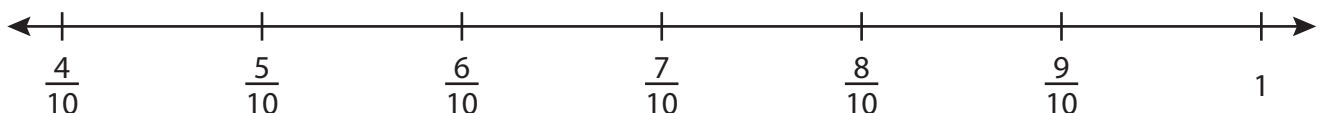
3) $\frac{1}{3} + \frac{2}{3} =$ _____



4) $\frac{2}{5} + \frac{1}{5} =$ _____



5) $\frac{4}{10} + \frac{4}{10} =$ _____



PREVIEW

Gain complete access to the largest collection of worksheets in all subjects!

Members, please log in to download this worksheet.

Not a member? Please sign up to gain complete access.

www.mathworksheets4kids.com

Name : _____

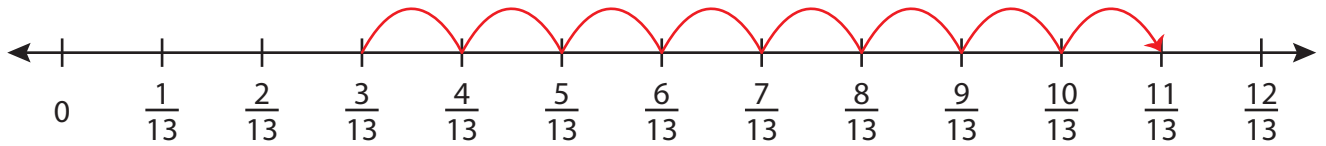
Answer key

Addition using Number Line

Proper Fractions: S3

Indicate hops on each number line and complete the addition sentences.

1) $\frac{3}{13} + \frac{8}{13} = \underline{\frac{11}{13}}$



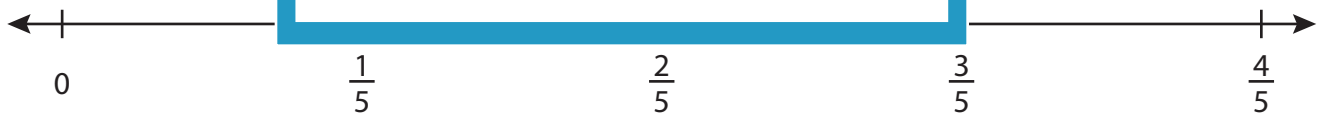
2) $\frac{2}{7} + \frac{3}{7} = \underline{\hspace{2cm}}$



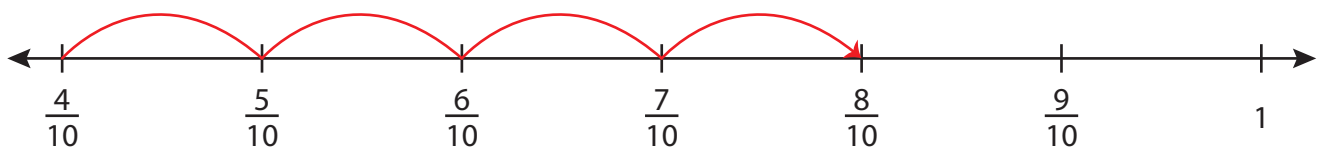
3) $\frac{1}{3} + \frac{2}{3} = \underline{\hspace{2cm}}$



4) $\frac{2}{5} + \frac{1}{5} = \underline{\hspace{2cm}}$



5) $\frac{4}{10} + \frac{4}{10} = \underline{\frac{8}{10} = \frac{4}{5}}$



PREVIEW

Gain complete access to the largest collection of worksheets in all subjects!

Members, please log in to download this worksheet.

Not a member? Please sign up to gain complete access.

www.mathworksheets4kids.com