

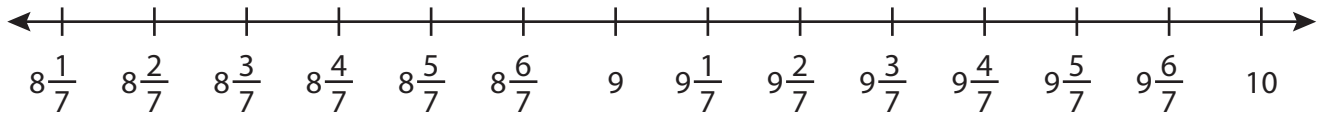
Name : _____

Addition using Number Line

Mixed Review: T2S2

Indicate hops on each number line and complete the addition sentences.

1) $8\frac{3}{7} + \frac{3}{7} =$ _____



2) $6\frac{1}{5} + 2\frac{1}{5} =$



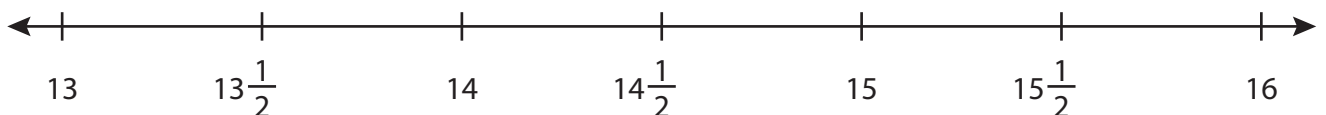
3) $\frac{3}{12} + \frac{8}{12} =$



4) $\frac{1}{4} + \frac{2}{4} =$



5) $13\frac{1}{2} + \frac{1}{2} =$ _____



PREVIEW

Gain complete access to the largest collection of worksheets in all subjects!

Members, please log in to download this worksheet.

Not a member? Please sign up to gain complete access.

www.mathworksheets4kids.com

Name : _____

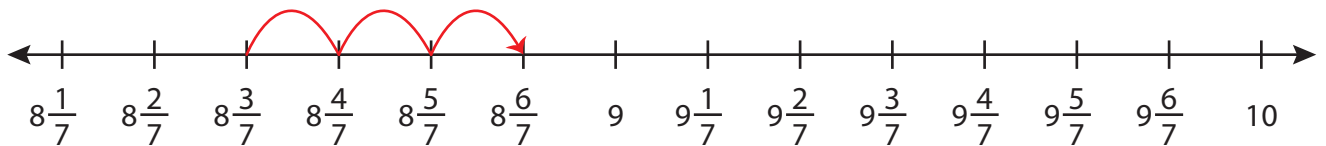
Answer key

Mixed Review: T2S2

Addition using Number Line

Indicate hops on each number line and complete the addition sentences.

1) $8\frac{3}{7} + \frac{3}{7} =$ **$8\frac{6}{7}$**



2) $6\frac{1}{5} + 2\frac{1}{5} =$



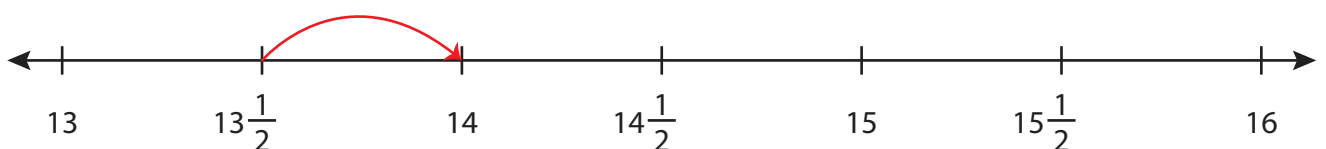
3) $\frac{3}{12} + \frac{8}{12} =$



4) $\frac{1}{4} + \frac{2}{4} =$



5) $13\frac{1}{2} + \frac{1}{2} =$ **14**



PREVIEW

Gain complete access to the largest collection of worksheets in all subjects!

Members, please log in to download this worksheet.

Not a member? Please sign up to gain complete access.

www.mathworksheets4kids.com