

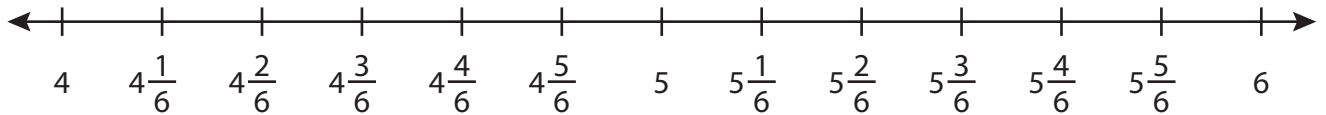
Name : _____

Addition using Number Line

Mixed Review: T2S3

Indicate hops on each number line and complete the addition sentences.

1) $4\frac{1}{6} + 1\frac{4}{6} =$ _____



2) $\frac{9}{15} + \frac{3}{15} =$ _____



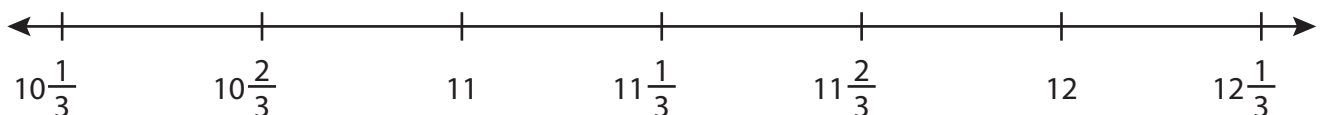
3) $14\frac{1}{7} + \frac{4}{7} =$ _____



4) $\frac{5}{8} + \frac{1}{8} =$ _____



5) $10\frac{1}{3} + 1\frac{2}{3} =$ _____



PREVIEW

Gain complete access to the largest collection of worksheets in all subjects!

Members, please log in to download this worksheet.

Not a member? Please sign up to gain complete access.

www.mathworksheets4kids.com

Name : _____

Answer key

Addition using Number Line

Mixed Review: T2S3

Indicate hops on each number line and complete the addition sentences.

1) $4\frac{1}{6} + 1\frac{4}{6} = \underline{5\frac{5}{6}}$



2) $\frac{9}{15} + \frac{3}{15} =$



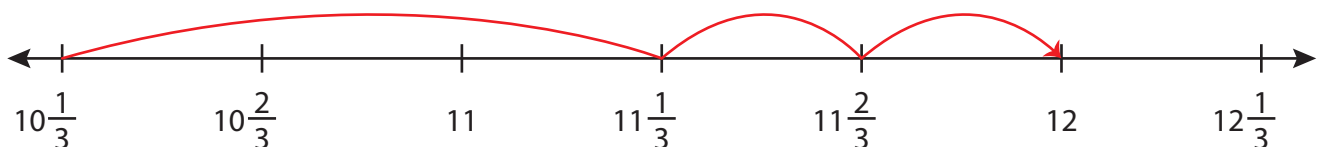
3) $14\frac{1}{7} + \frac{4}{7} =$



4) $\frac{5}{8} + \frac{1}{8} =$



5) $10\frac{1}{3} + 1\frac{2}{3} = \underline{12}$



PREVIEW

Gain complete access to the largest collection of worksheets in all subjects!

Members, please log in to download this worksheet.

Not a member? Please sign up to gain complete access.

www.mathworksheets4kids.com