

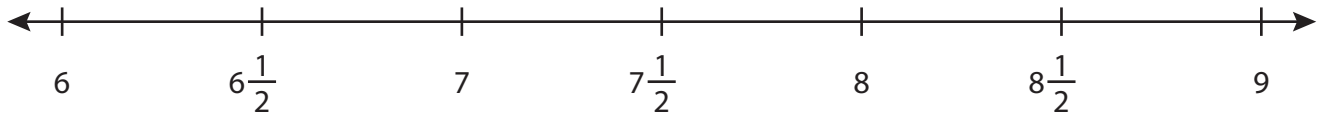
Name : _____

Addition using Number Line

Mixed Review: T2S4

Indicate hops on each number line and complete the addition sentences.

1) $7\frac{1}{2} + \frac{1}{2} =$ _____



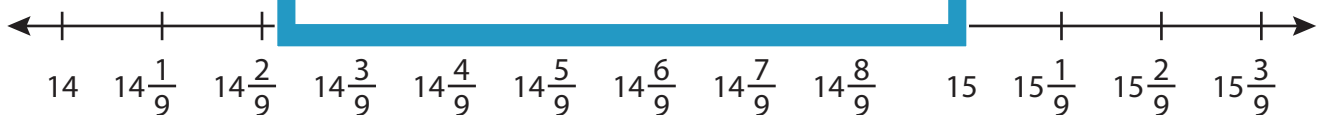
2) $12\frac{1}{7} + 1\frac{1}{7} =$



3) $\frac{9}{14} + \frac{4}{14} =$



4) $14\frac{1}{9} + \frac{5}{9} =$



5) $\frac{2}{6} + \frac{3}{6} =$ _____



PREVIEW

Gain complete access to the largest collection of worksheets in all subjects!

Members, please log in to download this worksheet.

Not a member? Please sign up to gain complete access.

www.mathworksheets4kids.com

Name : _____

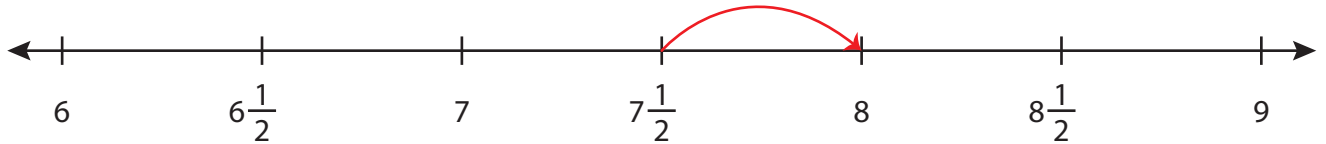
Answer key

Addition using Number Line

Mixed Review: T2S4

Indicate hops on each number line and complete the addition sentences.

1) $7\frac{1}{2} + \frac{1}{2} =$ 8



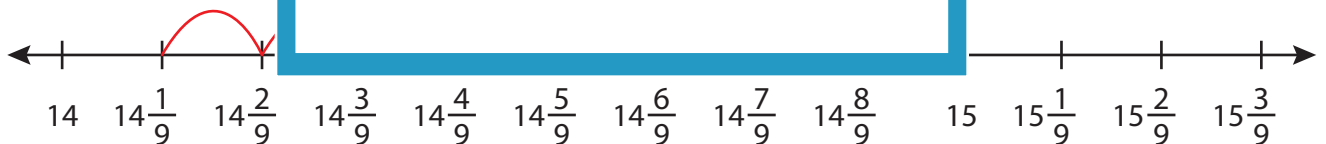
2) $12\frac{1}{7} + 1\frac{1}{7} =$



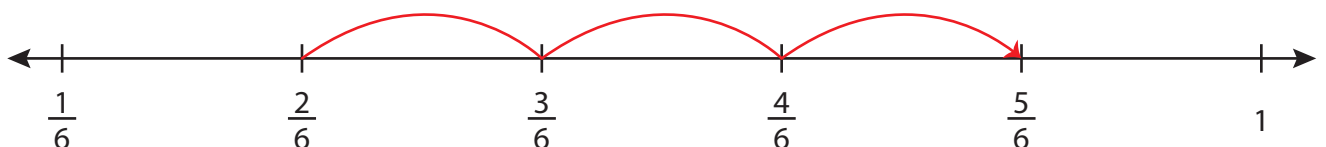
3) $\frac{9}{14} + \frac{4}{14} =$



4) $14\frac{1}{9} + \frac{5}{9} =$



5) $\frac{2}{6} + \frac{3}{6} =$ $\frac{5}{6}$



PREVIEW

Gain complete access to the largest collection of worksheets in all subjects!

Members, please log in to download this worksheet.

Not a member? Please sign up to gain complete access.

www.mathworksheets4kids.com