

Name : _____

Addition using Number Line

Mixed Review: T2S5

Indicate hops on each number line and complete the addition sentences.

1) $\frac{1}{7} + \frac{5}{7} =$ _____



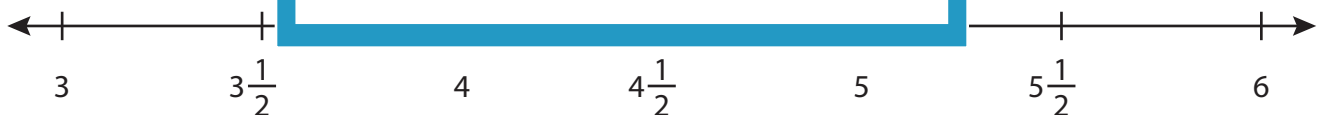
2) $6\frac{1}{8} + \frac{4}{8} =$ _____



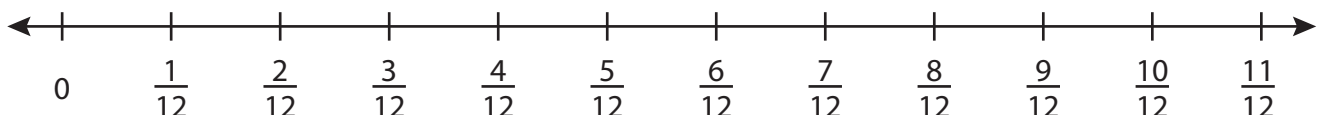
3) $\frac{4}{11} + \frac{5}{11} =$ _____



4) $3\frac{1}{2} + 2\frac{1}{2} =$ _____



5) $\frac{7}{12} + \frac{3}{12} =$ _____



PREVIEW

Gain complete access to the largest collection of worksheets in all subjects!

Members, please log in to download this worksheet.

Not a member? Please sign up to gain complete access.

www.mathworksheets4kids.com

Name : _____

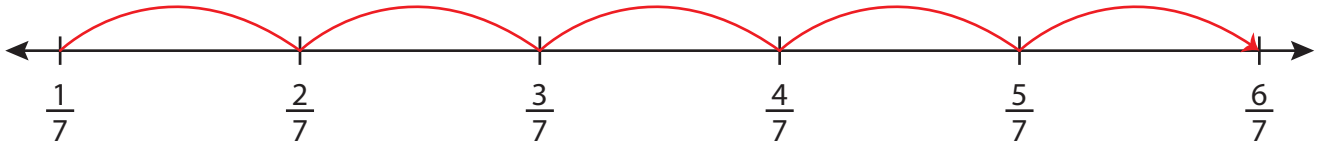
Answer key

Addition using Number Line

Mixed Review: T2S5

Indicate hops on each number line and complete the addition sentences.

1) $\frac{1}{7} + \frac{5}{7} = \underline{\frac{6}{7}}$



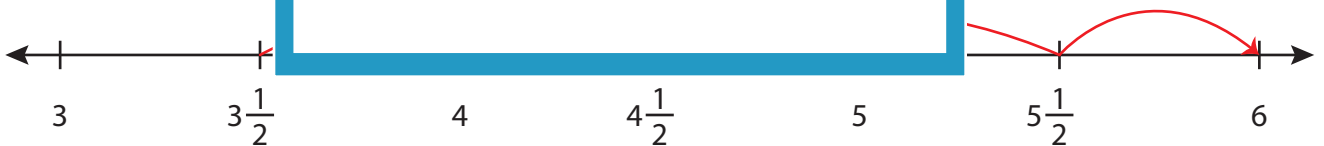
2) $6\frac{1}{8} + \frac{4}{8} =$



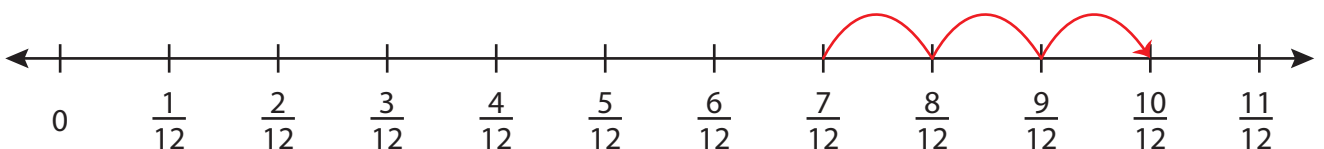
3) $\frac{4}{11} + \frac{5}{11} =$



4) $3\frac{1}{2} + 2\frac{1}{2} =$



5) $\frac{7}{12} + \frac{3}{12} = \underline{\frac{10}{12} = \frac{5}{6}}$



PREVIEW

Gain complete access to the largest collection of worksheets in all subjects!

Members, please log in to download this worksheet.

Not a member? Please sign up to gain complete access.

www.mathworksheets4kids.com