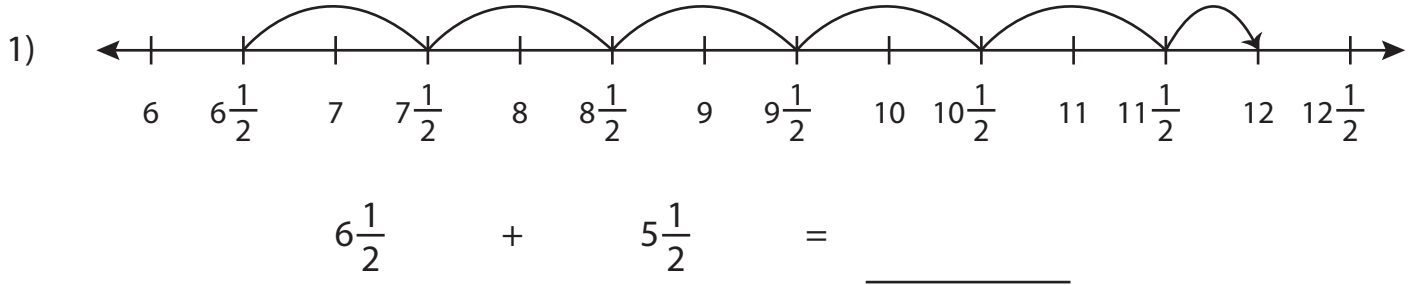


Name : _____

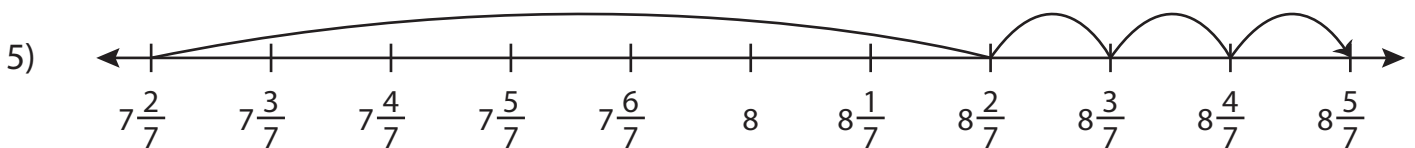
Missing Fractions

Mixed Numbers: S2

Complete the addition sentence that describes each model.



$7\frac{1}{3} + \underline{\hspace{2cm}} = 10$



$\underline{\hspace{2cm}} + 1\frac{3}{7} = 8\frac{5}{7}$

PREVIEW

Gain complete access to the largest collection of worksheets in all subjects!

Members, please log in to download this worksheet.

Not a member? Please sign up to gain complete access.

www.mathworksheets4kids.com

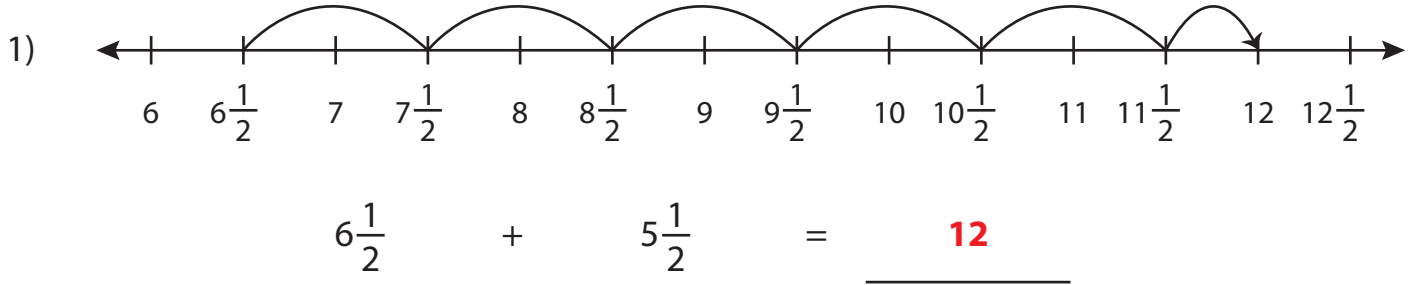
Name : _____

Answer key

Missing Fractions

Mixed Numbers: S2

Complete the addition sentence that describes each model.



3

Gain complete access to the largest collection of worksheets in all subjects!

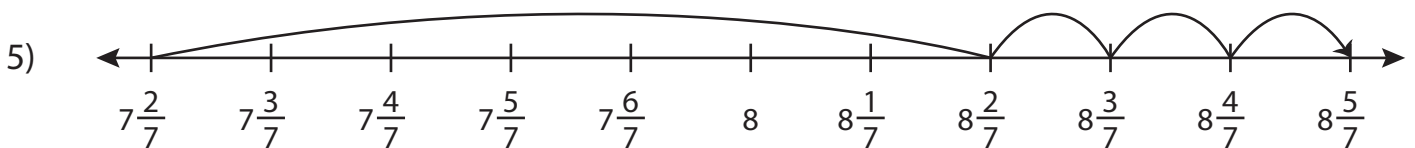
Members, please log in to download this worksheet.

Not a member? Please sign up to gain complete access.

www.mathworksheets4kids.com



$7\frac{1}{3} + \underline{2\frac{2}{3}} = 10$



$\underline{7\frac{2}{7}} + 1\frac{3}{7} = 8\frac{5}{7}$