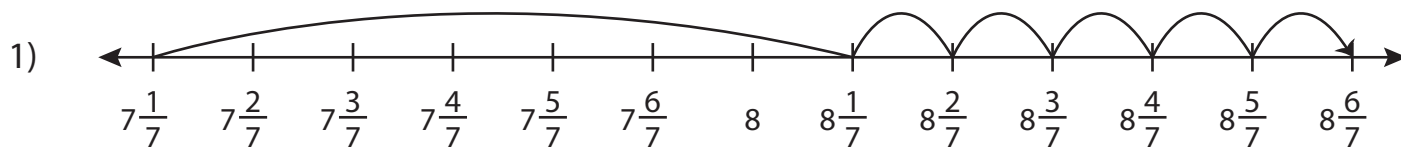


Name : _____

Addition Sentence

Mixed Review: T2S2

Complete the addition sentence that describes each model.



_____ + _____ = _____



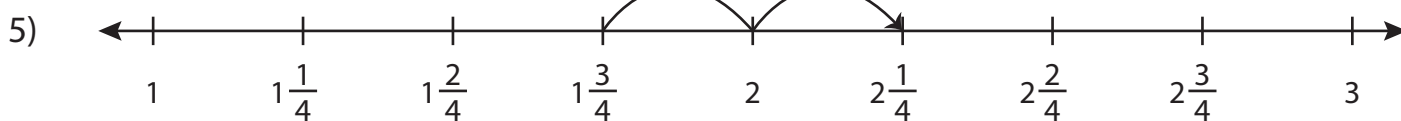
_____ + _____ = _____



_____ + _____ = _____



_____ + _____ = _____



_____ + _____ = _____

PREVIEW

Gain complete access to the largest collection of worksheets in all subjects!

Members, please log in to download this worksheet.

Not a member? Please sign up to gain complete access.

www.mathworksheets4kids.com

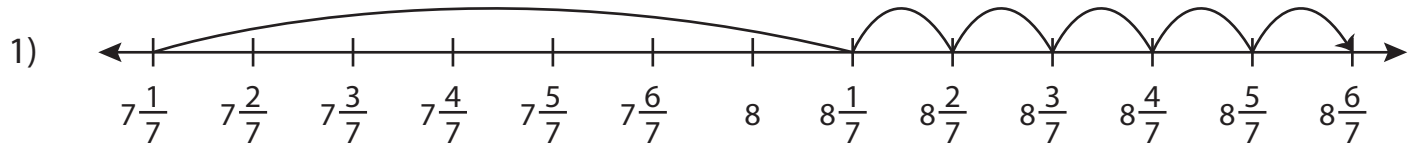
Name : _____

Answer key

Addition Sentence

Mixed Review: T2S2

Complete the addition sentence that describes each model.



$$\underline{7\frac{1}{7}} + \underline{1\frac{5}{7}} = \underline{8\frac{6}{7}}$$



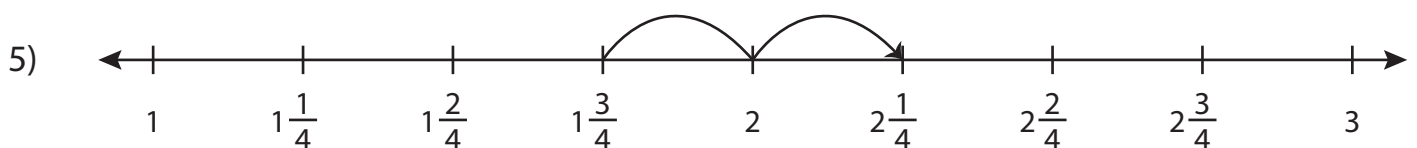
$$\underline{2\frac{2}{3}} + \underline{2\frac{2}{3}} = \underline{4\frac{4}{3}}$$



$$\underline{2\frac{1}{6}} + \underline{2\frac{2}{6}} = \underline{4\frac{3}{6}}$$



$$\underline{5\frac{5}{12}} + \underline{6\frac{6}{12}} = \underline{11\frac{11}{12}}$$



$$\underline{1\frac{3}{4}} + \underline{2\frac{2}{4}} = \underline{3\frac{5}{4}}$$

PREVIEW

Gain complete access to the largest collection of worksheets in all subjects!

Members, please log in to download this worksheet.

Not a member? Please sign up to gain complete access.

www.mathworksheets4kids.com