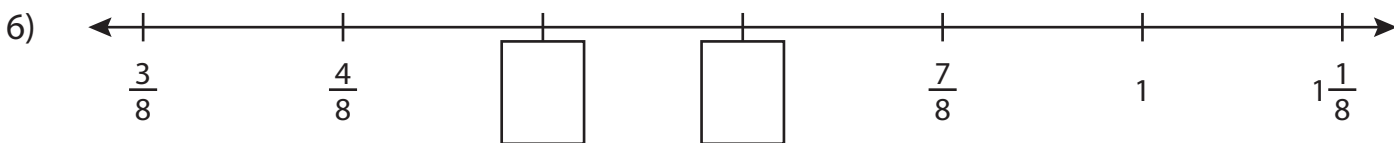
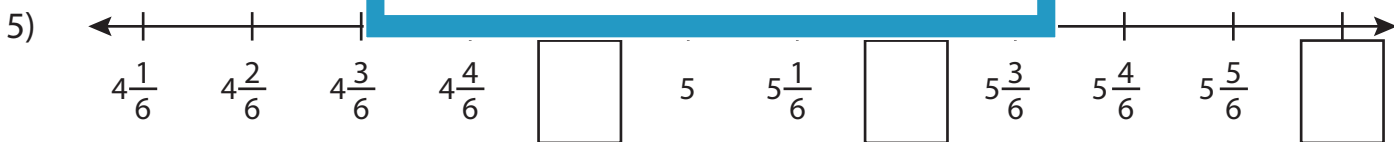
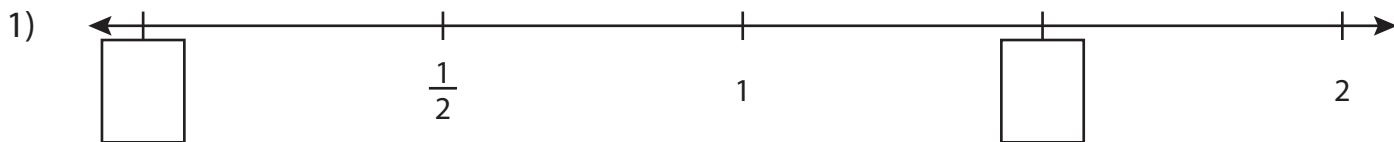


Name : \_\_\_\_\_

# Missing Fractions

Mixed Review: T1S2

Write the missing fractions in each number line.



**PREVIEW**

Gain complete access to the largest collection of worksheets in all subjects!

Members, please log in to download this worksheet.

Not a member? Please sign up to gain complete access.

[www.mathworksheets4kids.com](http://www.mathworksheets4kids.com)

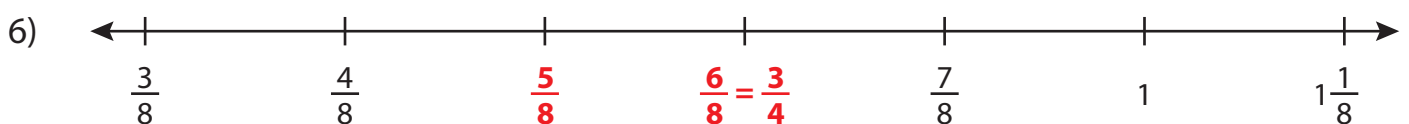
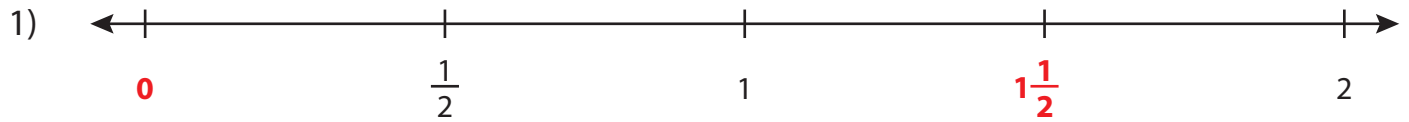
Name : \_\_\_\_\_

## Answer key

# Missing Fractions

Mixed Review: T1S2

Write the missing fractions in each number line.



Gain complete access to the largest collection of worksheets in all subjects!

Members, please log in to download this worksheet.

Not a member? Please sign up to gain complete access.

[www.mathworksheets4kids.com](http://www.mathworksheets4kids.com)