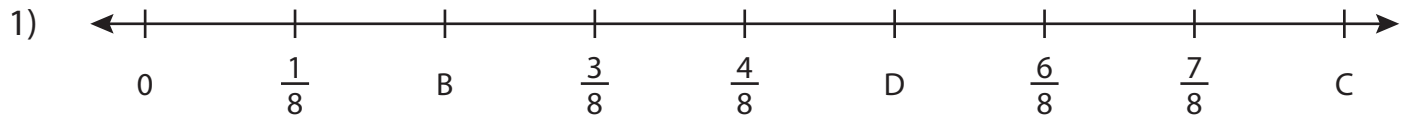


Name : _____

Missing Fractions

Mixed Review: T2S4

What fractions do the letters in each number line represent?



B = _____ ; C = _____ ; D = _____



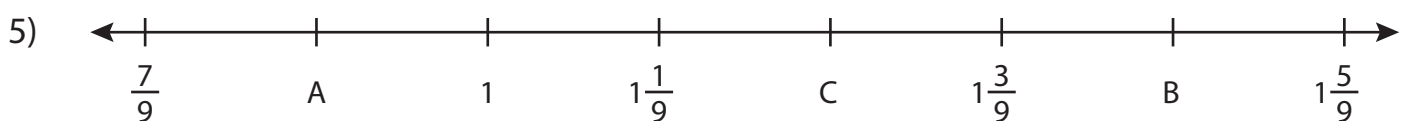
P = _____



S = _____



K = _____ ; L = _____ ; M = _____



A = _____ ; B = _____ ; C = _____

PREVIEW

Gain complete access to the largest collection of worksheets in all subjects!

Members, please log in to download this worksheet.

Not a member? Please sign up to gain complete access.

www.mathworksheets4kids.com

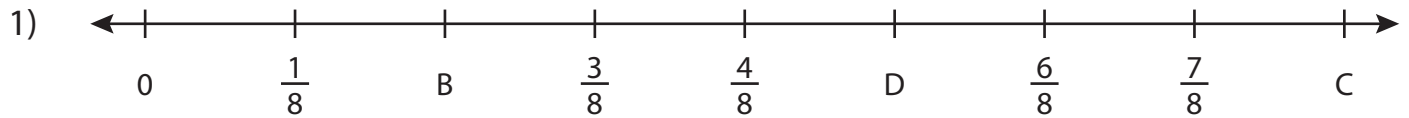
Name : _____

Answer key

Missing Fractions

Mixed Review: T2S4

What fractions do the letters in each number line represent?



B = $\frac{2}{8} = \frac{1}{4}$; C = 1 ; D = $\frac{5}{8}$



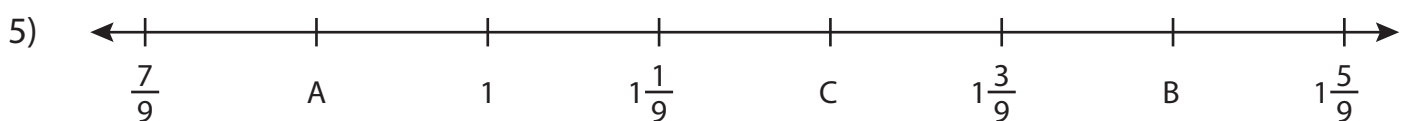
P = _____



S = _____



K = $\frac{1}{5}$; L = $\frac{2}{5}$; M = $\frac{3}{5}$



A = $\frac{8}{9}$; B = $1\frac{4}{9}$; C = $1\frac{2}{9}$

PREVIEW

Gain complete access to the largest collection of worksheets in all subjects!

Members, please log in to download this worksheet.

Not a member? Please sign up to gain complete access.

www.mathworksheets4kids.com