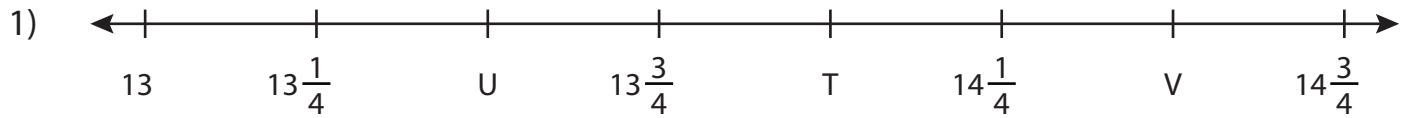


Name : _____

Missing Fractions

Mixed Review: T2S5

What fractions do the letters in each number line represent?



T = _____ ; U = _____ ; V = _____



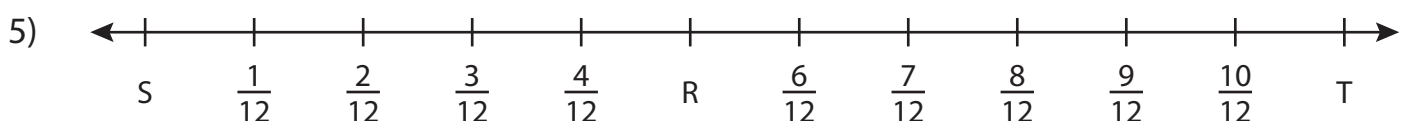
L = _____



D = _____



W = _____ ; X = _____ ; Y = _____



R = _____ ; S = _____ ; T = _____

PREVIEW

Gain complete access to the largest collection of worksheets in all subjects!

Members, please log in to download this worksheet.

Not a member? Please sign up to gain complete access.

www.mathworksheets4kids.com

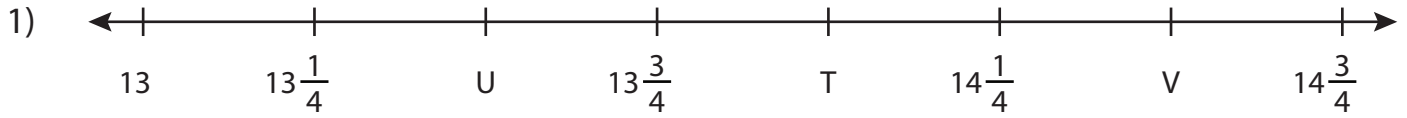
Name : _____

Answer key

Missing Fractions

Mixed Review: T2S5

What fractions do the letters in each number line represent?



T = 14 ; U = $\underline{13\frac{2}{4} = 13\frac{1}{2}}$; V = $\underline{14\frac{2}{4} = 14\frac{1}{2}}$



L = $\underline{2\frac{1}{2}}$



D = _____



W = $\underline{\frac{1}{9}}$; X = $\underline{\frac{5}{9}}$; Y = $\underline{\frac{7}{9} = \frac{2}{3}}$



R = $\underline{\frac{5}{12}}$; S = 0 ; T = $\underline{\frac{11}{12}}$