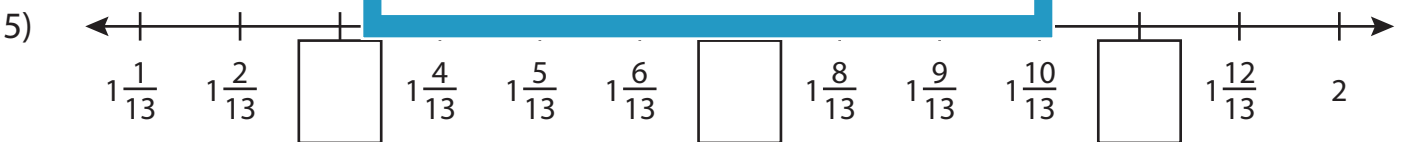
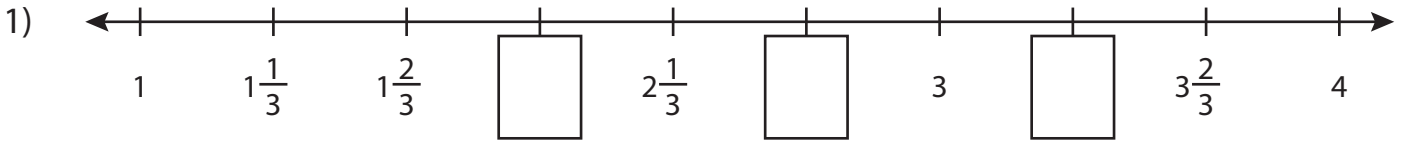


Name : _____

Missing Fractions

Mixed Numbers: T1S1

Write the missing fractions in each number line.



PREVIEW

Gain complete access to the largest collection of worksheets in all subjects!

Members, please log in to download this worksheet.

Not a member? Please sign up to gain complete access.

www.mathworksheets4kids.com



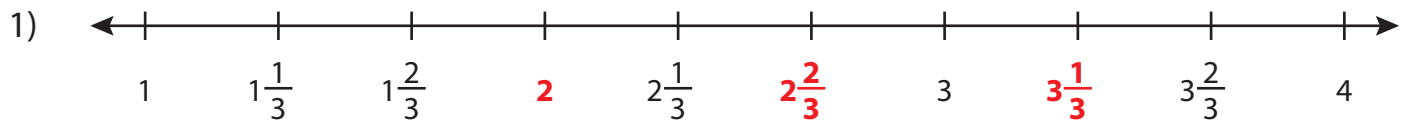
Name : _____

Answer key

Missing Fractions

Mixed Numbers: T1S1

Write the missing fractions in each number line.



PREVIEW

Gain complete access to the largest collection of worksheets in all subjects!

Members, please log in to download this worksheet.

Not a member? Please sign up to gain complete access.

www.mathworksheets4kids.com