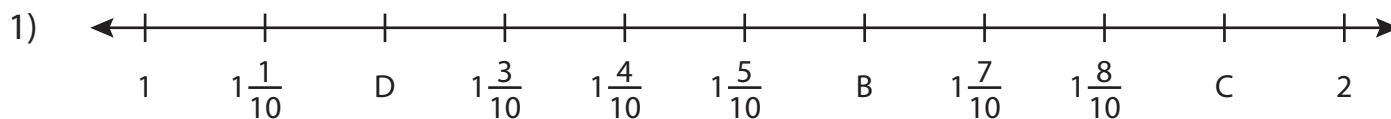


Name : \_\_\_\_\_

## Missing Fractions

Mixed Numbers: T2S1

What fractions do the letters in each number line represent?



B = \_\_\_\_\_ ; C = \_\_\_\_\_ ; D = \_\_\_\_\_



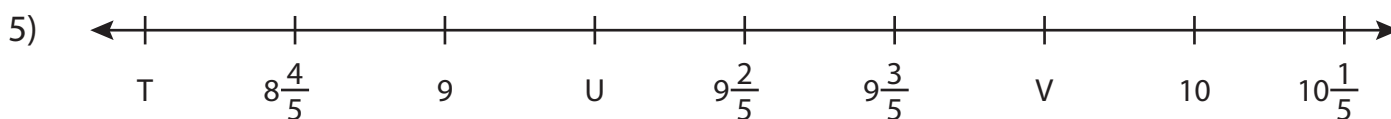
X = \_\_\_\_\_



P = \_\_\_\_\_



E = \_\_\_\_\_ ; F = \_\_\_\_\_ ; G = \_\_\_\_\_



T = \_\_\_\_\_ ; U = \_\_\_\_\_ ; V = \_\_\_\_\_

**PREVIEW**

Gain complete access to the largest collection of worksheets in all subjects!

Members, please log in to download this worksheet.

Not a member? Please sign up to gain complete access.

[www.mathworksheets4kids.com](http://www.mathworksheets4kids.com)

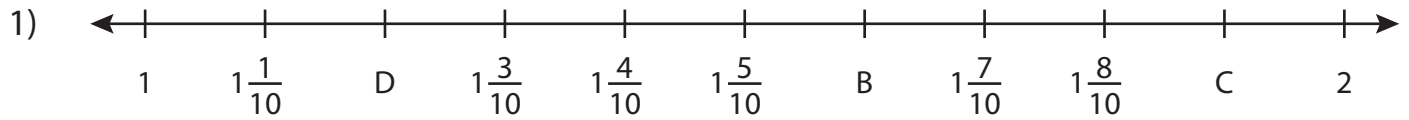
Name : \_\_\_\_\_

## Answer key

# Missing Fractions

Mixed Numbers: T2S1

What fractions do the letters in each number line represent?



B =  $1\frac{6}{10} = 1\frac{3}{5}$  ; C =  $1\frac{9}{10}$  ; D =  $1\frac{2}{10} = 1\frac{1}{5}$



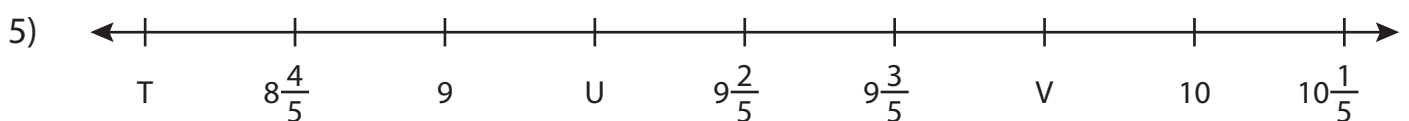
X = \_\_\_\_\_



P = \_\_\_\_\_



E =  $4\frac{5}{11}$  ; F =  $4\frac{7}{11}$  ; G =  $4\frac{8}{11}$



T =  $8\frac{3}{5}$  ; U =  $9\frac{1}{5}$  ; V =  $9\frac{4}{5}$

**PREVIEW**

Gain complete access to the largest collection of worksheets in all subjects!

Members, please log in to download this worksheet.

Not a member? Please sign up to gain complete access.

[www.mathworksheets4kids.com](http://www.mathworksheets4kids.com)