

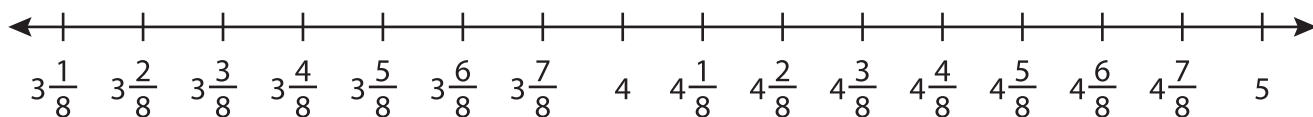
Name : _____

Subtraction using Number Line

Mixed Numbers: S2

Indicate hops on each number line and complete the subtraction sentences.

1) $4\frac{7}{8} - 1\frac{5}{8} =$ _____



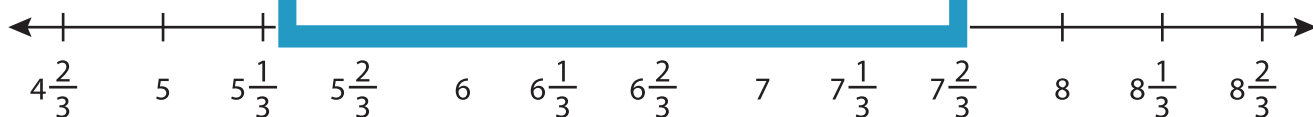
2) $3\frac{1}{4} - 2\frac{1}{4} =$ _____



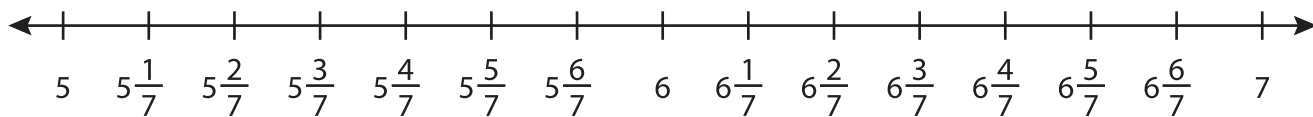
3) $12\frac{2}{6} - 1\frac{4}{6} =$ _____



4) $8\frac{1}{3} - 3\frac{2}{3} =$ _____



5) $6\frac{5}{7} - 1\frac{3}{7} =$ _____



PREVIEW

Gain complete access to the largest collection of worksheets in all subjects!

Members, please log in to download this worksheet.

Not a member? Please sign up to gain complete access.

www.mathworksheets4kids.com