

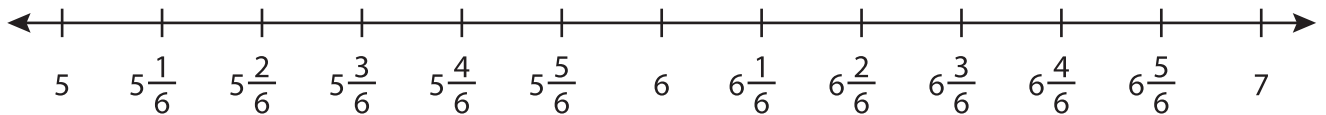
Name : \_\_\_\_\_

## Subtraction using Number Line

Mixed Numbers: S3

Indicate hops on each number line and complete the subtraction sentences.

1)  $6\frac{5}{6} - 1\frac{4}{6} =$  \_\_\_\_\_



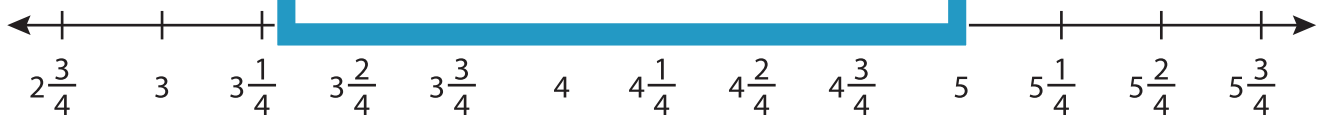
2)  $9\frac{1}{3} - 2\frac{2}{3} =$  \_\_\_\_\_



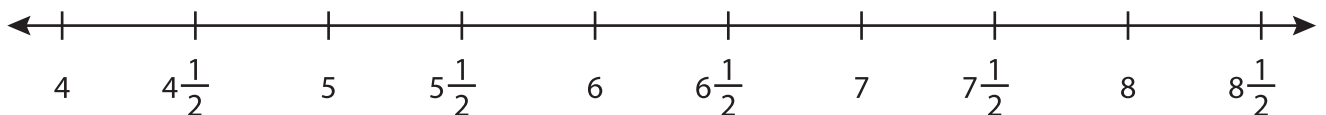
3)  $2\frac{9}{12} - 1\frac{1}{12} =$  \_\_\_\_\_



4)  $5\frac{3}{4} - 2\frac{2}{4} =$  \_\_\_\_\_



5)  $8\frac{1}{2} - 4\frac{1}{2} =$  \_\_\_\_\_



# PREVIEW

Gain complete access to the largest collection of worksheets in all subjects!

Members, please log in to download this worksheet.

Not a member? Please sign up to gain complete access.

[www.mathworksheets4kids.com](http://www.mathworksheets4kids.com)