

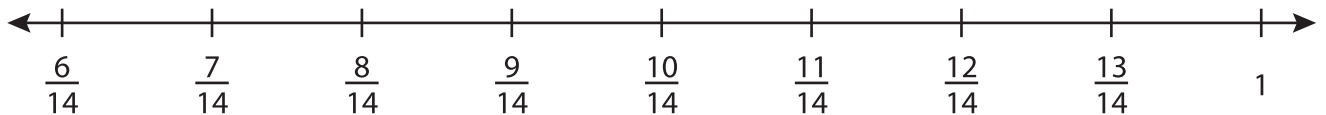
Name : _____

Subtraction using Number Line

Mixed Review: T2S4

Indicate hops on each number line and complete the subtraction sentences.

1) $\frac{13}{14} - \frac{5}{14} =$ _____



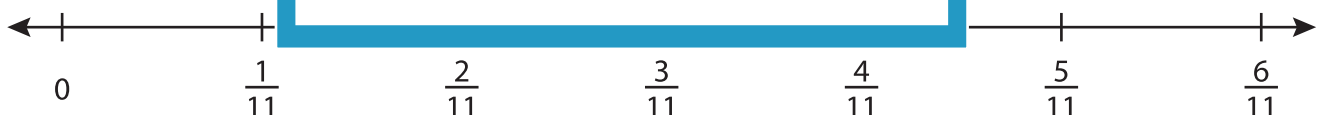
2) $13\frac{3}{5} - 1\frac{2}{5} =$ _____



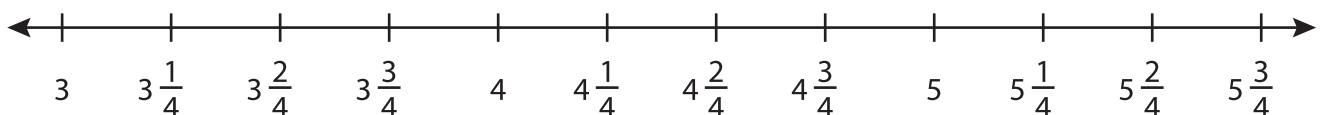
3) $3\frac{1}{7} - \frac{6}{7} =$ _____



4) $\frac{6}{11} - \frac{6}{11} =$ _____



5) $5\frac{2}{4} - 2\frac{1}{4} =$ _____



PREVIEW

Gain complete access to the largest collection of worksheets in all subjects!

Members, please log in to download this worksheet.

Not a member? Please sign up to gain complete access.

www.mathworksheets4kids.com