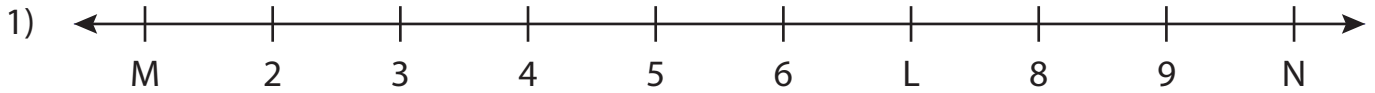


Name : _____

Missing Numbers

T3L1S2

What numbers do the letters in each number line represent?



L = _____ ; M = _____ ; N = _____



J = _____



F = _____



B = _____



P = _____ ; Q = _____ ; R = _____



U = _____ ; V = _____ ; W = _____

PREVIEW

Gain complete access to the largest collection of worksheets in all subjects!

Members, please log in to download this worksheet.

Not a member? Please sign up to gain complete access.

www.mathworksheets4kids.com

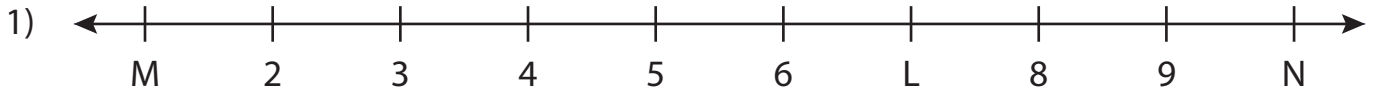
Name : _____

Answer key

Missing Numbers

T3L1S2

What numbers do the letters in each number line represent?



L = 7 ; M = 1 ; N = 10



J = 3




F = 5



B = 5



P = 2 ; Q = 3 ; R = 4



U = 10 ; V = 4 ; W = 0

PREVIEW

Gain complete access to the largest collection of worksheets in all subjects!

Members, please log in to download this worksheet.

Not a member? Please sign up to gain complete access.

www.mathworksheets4kids.com