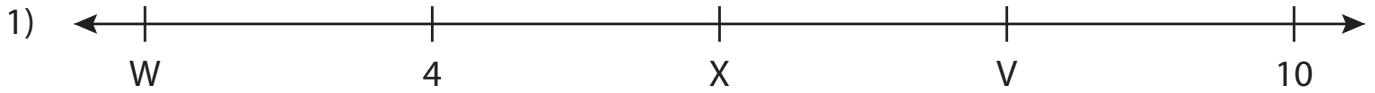


Name : _____

Missing Numbers

T3L1S3

What numbers do the letters in each number line represent?



V = _____ ; W = _____ ; X = _____



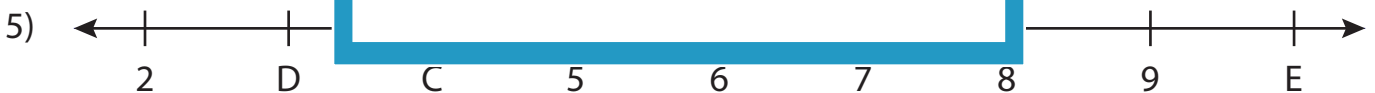
K = _____



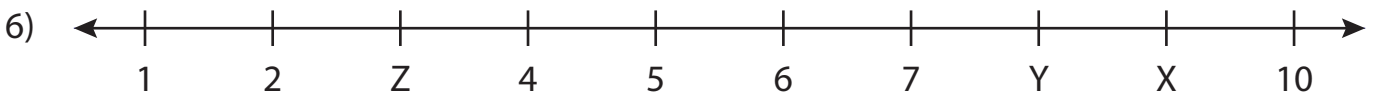
S = _____



A = _____



C = _____ ; D = _____ ; E = _____



X = _____ ; Y = _____ ; Z = _____

PREVIEW

Gain complete access to the largest collection of worksheets in all subjects!

Members, please log in to download this worksheet.

Not a member? Please sign up to gain complete access.

www.mathworksheets4kids.com

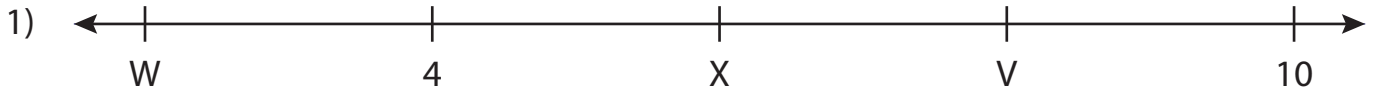
Name : _____

Answer key

Missing Numbers

T3L1S3

What numbers do the letters in each number line represent?



V = 8 ; W = 2 ; X = 6



K = 3



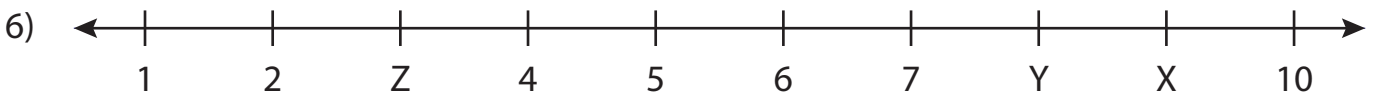
S = 4



A = 2



C = 4 ; D = 3 ; E = 10



X = 9 ; Y = 8 ; Z = 3

PREVIEW

Gain complete access to the largest collection of worksheets in all subjects!

Members, please log in to download this worksheet.

Not a member? Please sign up to gain complete access.

www.mathworksheets4kids.com