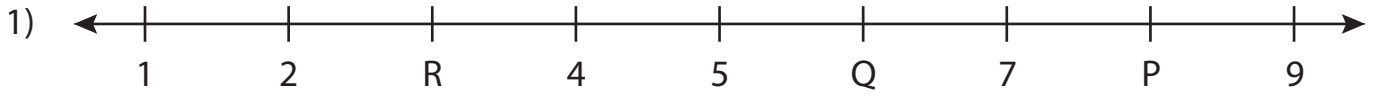


Name : _____

Missing Numbers

T3L1S5

What numbers do the letters in each number line represent?



P = _____ ; Q = _____ ; R = _____



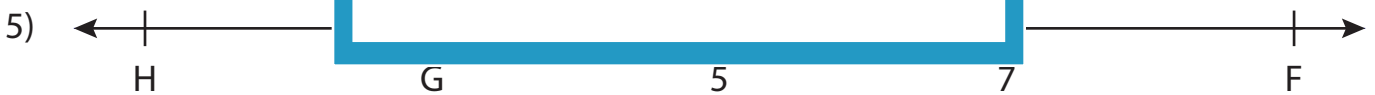
T = _____



A = _____



Q = _____



F = _____ ; G = _____ ; H = _____



K = _____ ; L = _____ ; M = _____

PREVIEW

Gain complete access to the largest collection of worksheets in all subjects!

Members, please log in to download this worksheet.

Not a member? Please sign up to gain complete access.

www.mathworksheets4kids.com

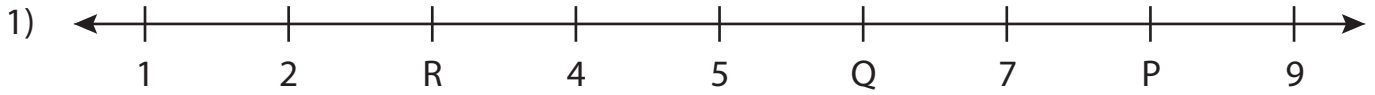
Name : _____

Answer key

Missing Numbers

T3L1S5

What numbers do the letters in each number line represent?



P = 8 ; Q = 6 ; R = 3



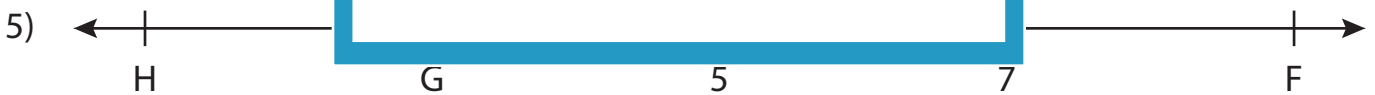
T = 3



A = 1



Q = 3



F = 9 ; G = 3 ; H = 1



K = 4 ; L = 6 ; M = 2

PREVIEW

Gain complete access to the largest collection of worksheets in all subjects!

Members, please log in to download this worksheet.

Not a member? Please sign up to gain complete access.

www.mathworksheets4kids.com