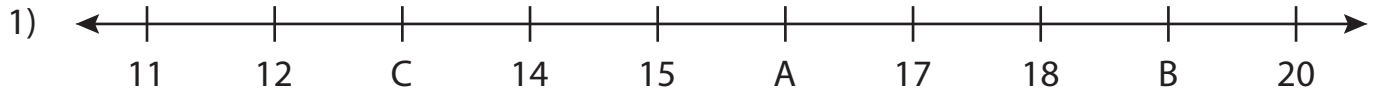


Name : _____

Missing Numbers

T3L2S4

What numbers do the letters in each number line represent?



A = _____ ; B = _____ ; C = _____



Q = _____



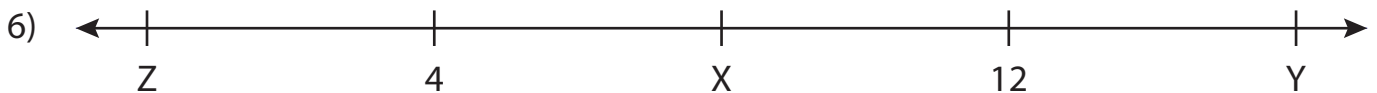
D = _____



L = _____



U = _____ ; V = _____ ; W = _____



X = _____ ; Y = _____ ; Z = _____

PREVIEW

Gain complete access to the largest collection of worksheets in all subjects!

Members, please log in to download this worksheet.

Not a member? Please sign up to gain complete access.

www.mathworksheets4kids.com

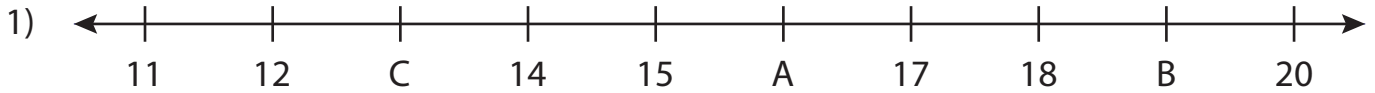
Name : _____

Answer key

Missing Numbers

T3L2S4

What numbers do the letters in each number line represent?



A = 16 ; B = 19 ; C = 13



Q = 1



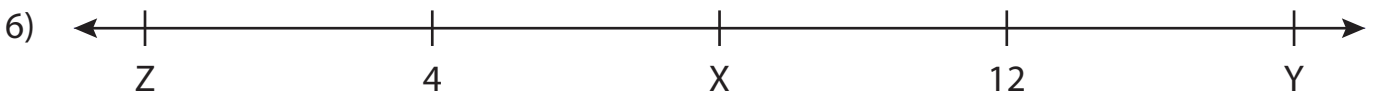
D = 9



L = 5



U = 11 ; V = 14 ; W = 10



X = 8 ; Y = 16 ; Z = 0

PREVIEW

Gain complete access to the largest collection of worksheets in all subjects!

Members, please log in to download this worksheet.

Not a member? Please sign up to gain complete access.

www.mathworksheets4kids.com