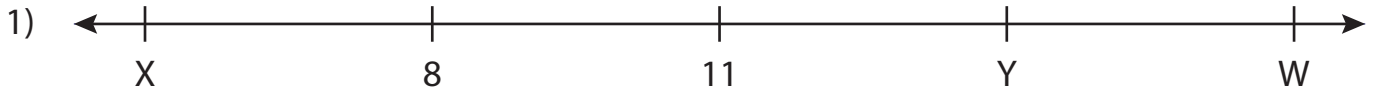


Name : _____

Missing Numbers

T3L2S5

What numbers do the letters in each number line represent?



W = _____ ; X = _____ ; Y = _____



F = _____




P = _____



A = _____



D = _____ ; E = _____ ; F = _____



J = _____ ; K = _____ ; L = _____

PREVIEW

Gain complete access to the largest collection of worksheets in all subjects!

Members, please log in to download this worksheet.

Not a member? Please sign up to gain complete access.

www.mathworksheets4kids.com

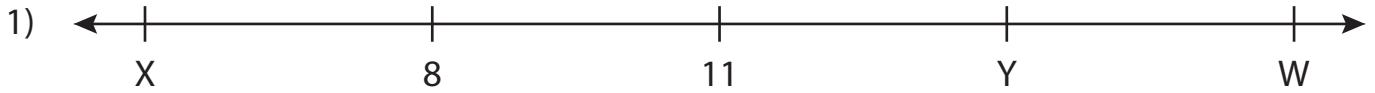
Name : _____

Answer key

Missing Numbers

T3L2S5

What numbers do the letters in each number line represent?



W = 17 ; X = 5 ; Y = 14



F = 3




P = 2



A = 9



D = 8 ; E = 6 ; F = 3



J = 11 ; K = 15 ; L = 7

PREVIEW

Gain complete access to the largest collection of worksheets in all subjects!

Members, please log in to download this worksheet.

Not a member? Please sign up to gain complete access.

www.mathworksheets4kids.com