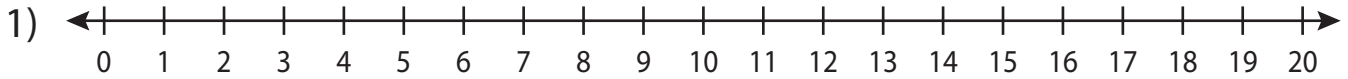


Name : \_\_\_\_\_

# Number Line

L2S3

Read the number line and answer the following.



- a) How many places will you hop to land at 12 from 3 on the number line?

\_\_\_\_\_

- b) Start at 15, hop 6 units to the left and then 16 units to the right.

\_\_\_\_\_

- c) Hop 10 units to the left from 10 on the number line. How many places will you land on?

\_\_\_\_\_

- d) At what number will you land if you hop 4 units to the right from 12, then 4 units to the left, then 4 units to the right, and then 4 units to the left?

\_\_\_\_\_

- e) If you move 16 units to the right from 0, then at what number will you land?

\_\_\_\_\_

## PREVIEW

Gain complete access to the largest collection of worksheets in all subjects!

Members, please log in to download this worksheet.

Not a member? Please sign up to gain complete access.

www.mathworksheets4kids.com

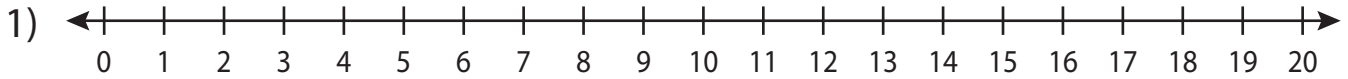
Name : \_\_\_\_\_

## Answer key

# Number Line

L2S3

Read the number line and answer the following.



- a) How many places will you hop to land at 12 from 3 on the number line?

\_\_\_\_\_ **9**

- b) Start at 15, hop 6 units to the left and then 16 units to the right?

\_\_\_\_\_ **18**

- c) Hop 10 units to the left from 18 on the number line. Where will you land on the number line?

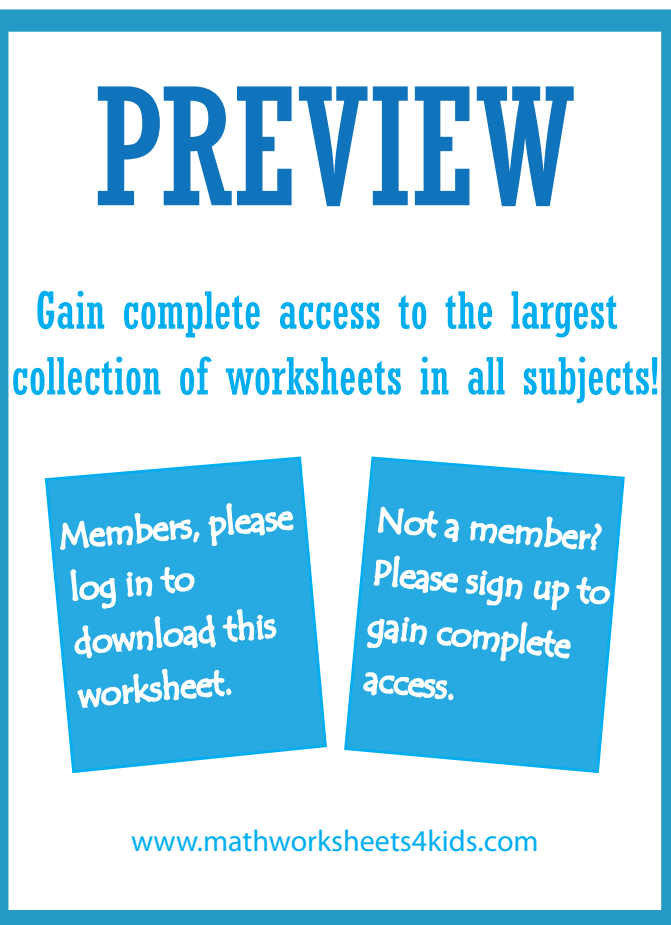
\_\_\_\_\_ **8**

- d) At what number will you land if you hop 16 units to the right from 4 on the number line and then 4 units to the left?

\_\_\_\_\_ **20**

- e) If you move 16 units to the right from 0, then at what number will you land?

\_\_\_\_\_ **16**



**PREVIEW**

Gain complete access to the largest collection of worksheets in all subjects!

Members, please log in to download this worksheet.

Not a member? Please sign up to gain complete access.

[www.mathworksheets4kids.com](http://www.mathworksheets4kids.com)