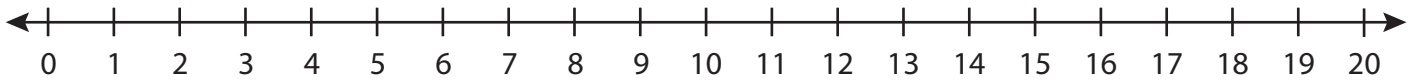


Number Line Multiplication

T1S2

Indicate hops on each number line and complete the multiplication sentences.

1) $7 \times 1 =$ _____



2) $3 \times 6 =$ _____



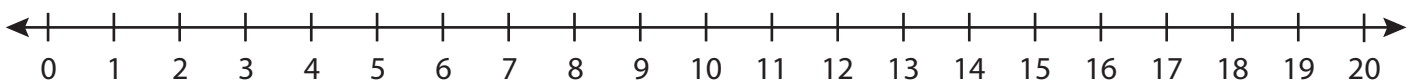
3) $4 \times 4 =$ _____



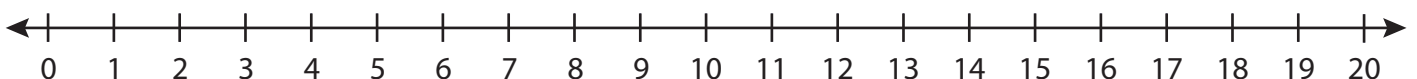
4) $2 \times 8 =$ _____



5) $5 \times 3 =$ _____



6) $9 \times 2 =$ _____



PREVIEW

Gain complete access to the largest
collection of worksheets in all subjects!

Members, please
log in to
download this
worksheet.

Not a member?
Please sign up to
gain complete
access.

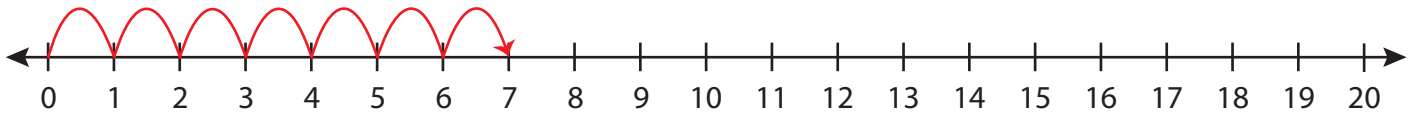
www.mathworksheets4kids.com

Number Line Multiplication

T1S2

Indicate hops on each number line and complete the multiplication sentences.

1) $7 \times 1 =$ 7



2) $3 \times 6 =$ 18



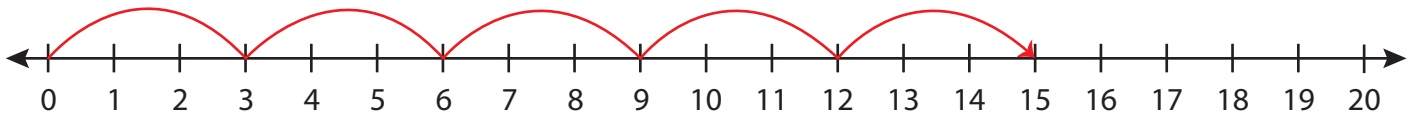
3) $4 \times 4 =$ 16



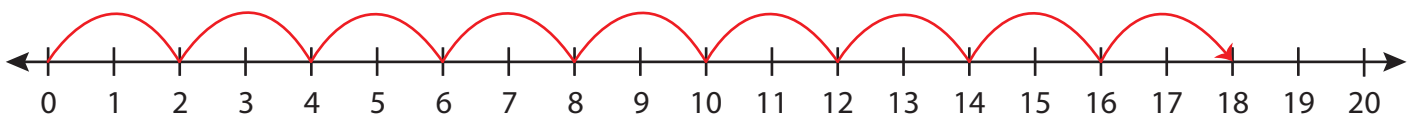
4) $2 \times 8 =$ 16



5) $5 \times 3 =$ 15



6) $9 \times 2 =$ 18



PREVIEW

Gain complete access to the largest collection of worksheets in all subjects!

Members, please log in to download this worksheet.

Not a member? Please sign up to gain complete access.

www.mathworksheets4kids.com