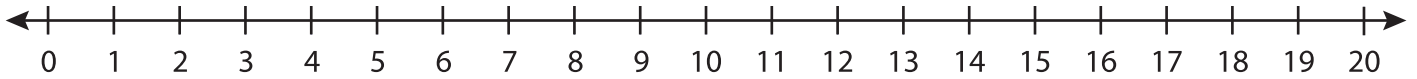


## Number Line Multiplication

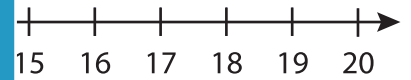
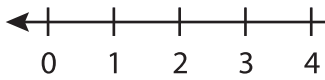
T1S4

Indicate hops on each number line and complete the multiplication sentences.

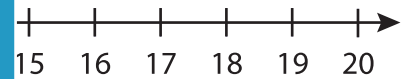
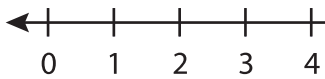
1)  $3 \times 4 =$  \_\_\_\_\_



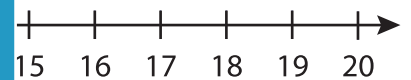
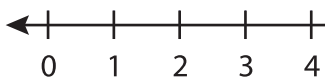
2)  $2 \times 9 =$  \_\_\_\_\_



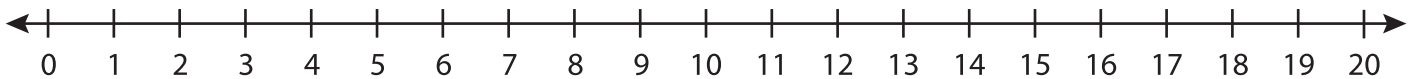
3)  $8 \times 2 =$  \_\_\_\_\_



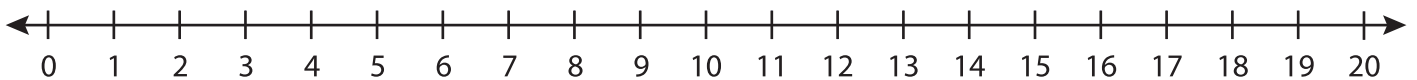
4)  $5 \times 1 =$  \_\_\_\_\_



5)  $6 \times 3 =$  \_\_\_\_\_



6)  $2 \times 5 =$  \_\_\_\_\_



# PREVIEW

Gain complete access to the largest  
collection of worksheets in all subjects!

Members, please  
log in to  
download this  
worksheet.

Not a member?  
Please sign up to  
gain complete  
access.

[www.mathworksheets4kids.com](http://www.mathworksheets4kids.com)