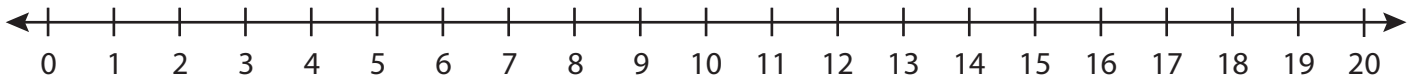


Number Line Multiplication

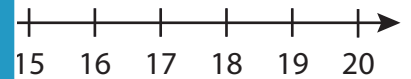
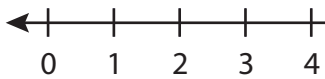
T1S5

Indicate hops on each number line and complete the multiplication sentences.

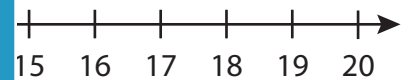
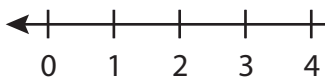
1) $6 \times 1 =$ _____



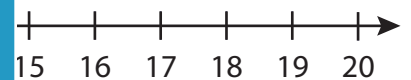
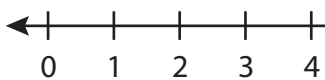
2) $5 \times 4 =$ _____



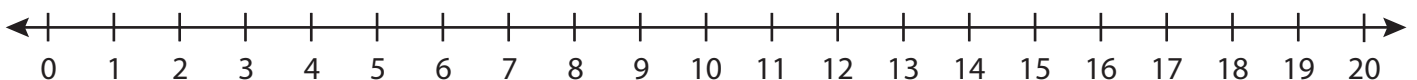
3) $1 \times 7 =$ _____



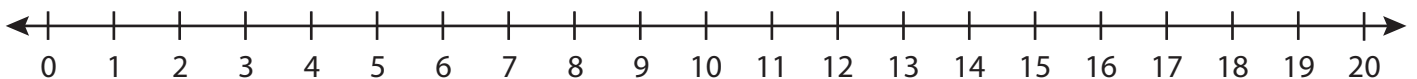
4) $2 \times 3 =$ _____



5) $4 \times 2 =$ _____



6) $2 \times 6 =$ _____



PREVIEW

Gain complete access to the largest
collection of worksheets in all subjects!

Members, please
log in to
download this
worksheet.

Not a member?
Please sign up to
gain complete
access.

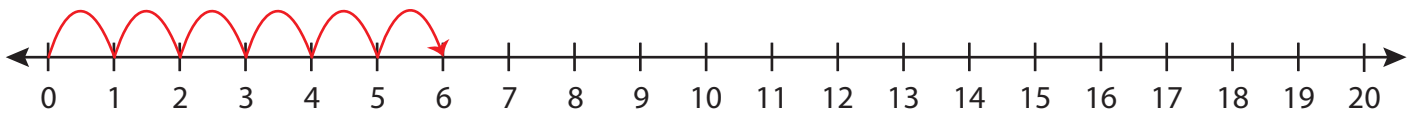
www.mathworksheets4kids.com

Number Line Multiplication

T1S5

Indicate hops on each number line and complete the multiplication sentences.

1) $6 \times 1 =$ 6



2) $5 \times 4 =$ 20



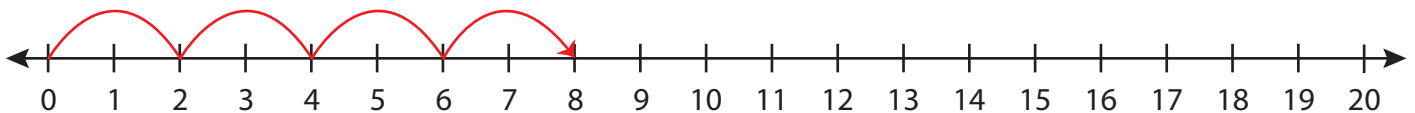
3) $1 \times 7 =$ _____



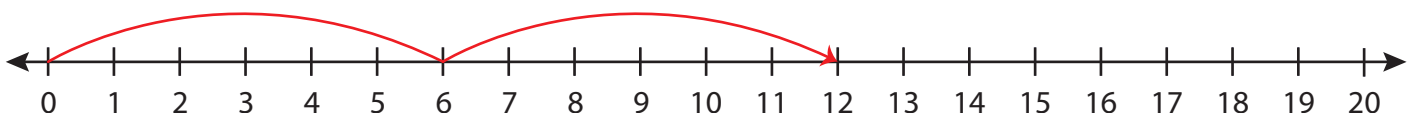
4) $2 \times 3 =$ _____



5) $4 \times 2 =$ _____



6) $2 \times 6 =$ 12



PREVIEW

Gain complete access to the largest collection of worksheets in all subjects!

Members, please log in to download this worksheet.

Not a member? Please sign up to gain complete access.

www.mathworksheets4kids.com