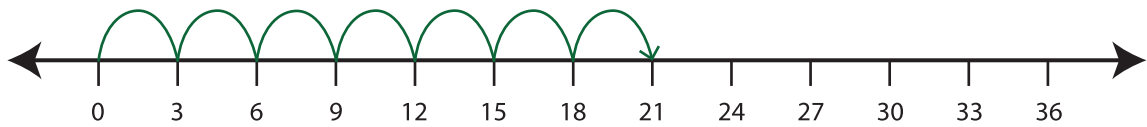


Number Line Multiplication

T2S1

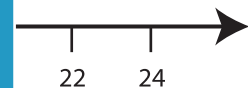
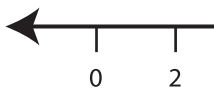
Example:

$$7 \times 3 = \underline{21}$$

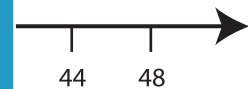
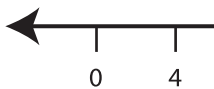


Indicate hops on each number line and complete the multiplication sentences.

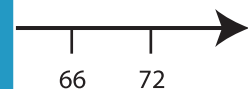
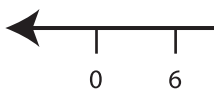
1) $5 \times 2 = \underline{\quad}$



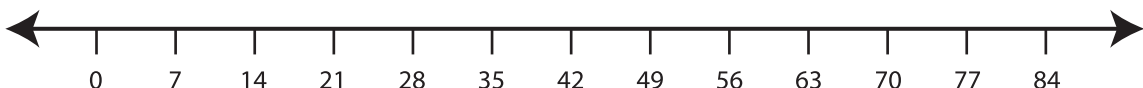
2) $3 \times 4 = \underline{\quad}$



3) $8 \times 6 = \underline{\quad}$



4) $2 \times 7 = \underline{\quad}$



5) $4 \times 9 = \underline{\quad}$



PREVIEW

Gain complete access to the largest
collection of worksheets in all subjects!

Members, please
log in to
download this
worksheet.

Not a member?
Please sign up to
gain complete
access.

www.mathworksheets4kids.com