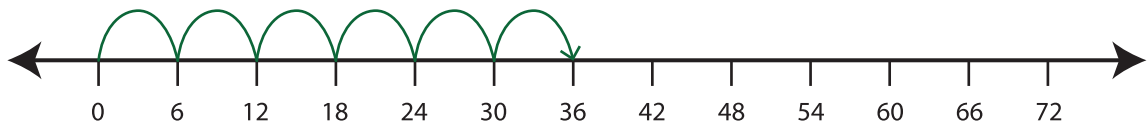


Number Line Multiplication

T2S2

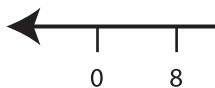
Example:

$$6 \times 6 = \underline{36}$$

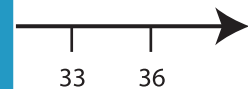
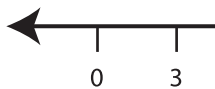


Indicate hops on each number line and complete the multiplication sentences.

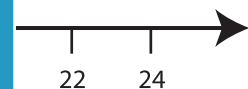
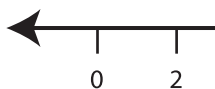
1) $4 \times 8 = \underline{\quad}$



2) $5 \times 3 = \underline{\quad}$



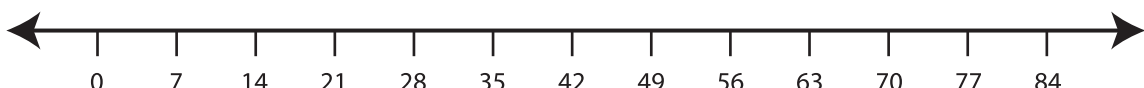
3) $9 \times 2 = \underline{\quad}$



4) $6 \times 5 = \underline{\quad}$



5) $8 \times 7 = \underline{\quad}$



PREVIEW

Gain complete access to the largest
collection of worksheets in all subjects!

Members, please
log in to
download this
worksheet.

Not a member?
Please sign up to
gain complete
access.

www.mathworksheets4kids.com