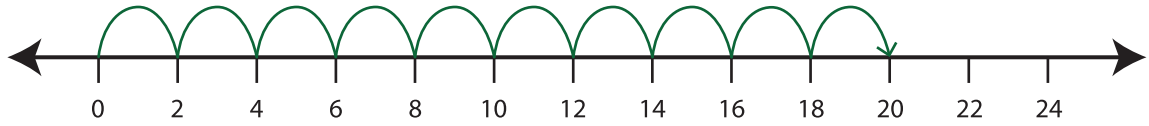


Number Line Multiplication

T2S3

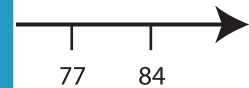
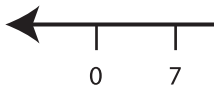
Example:

$$10 \times 2 = \underline{20}$$

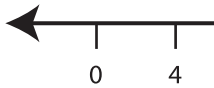


Indicate hops on each number line and complete the multiplication sentences.

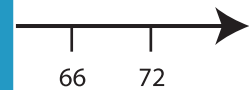
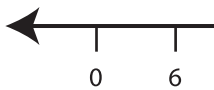
1) $7 \times 7 =$ _____



2) $2 \times 4 =$ _____



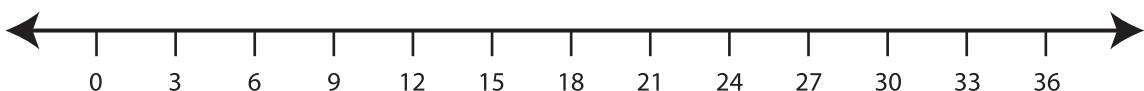
3) $3 \times 6 =$ _____



4) $1 \times 9 =$ _____



5) $8 \times 3 =$ _____



PREVIEW

Gain complete access to the largest
collection of worksheets in all subjects!

Members, please
log in to
download this
worksheet.

Not a member?
Please sign up to
gain complete
access.

www.mathworksheets4kids.com