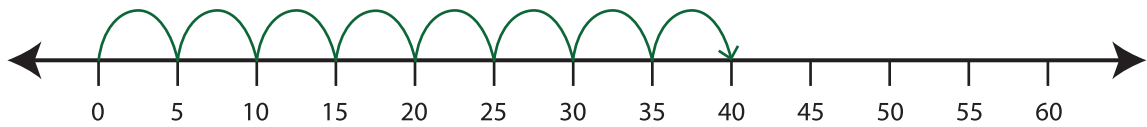


Number Line Multiplication

T2S4

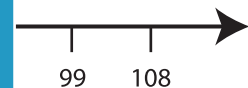
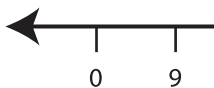
Example:

$$8 \times 5 = \underline{40}$$

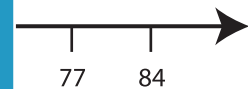
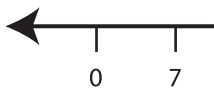


Indicate hops on each number line and complete the multiplication sentences.

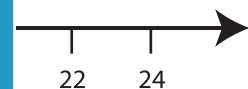
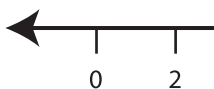
1) $5 \times 9 =$ _____



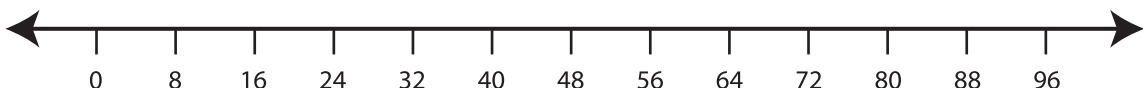
2) $3 \times 7 =$ _____



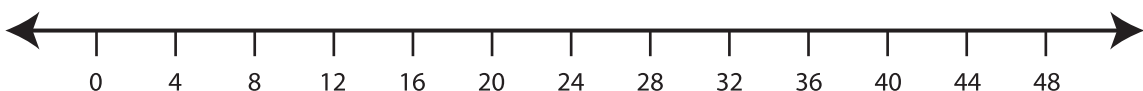
3) $6 \times 2 =$ _____



4) $9 \times 8 =$ _____



5) $10 \times 4 =$ _____



PREVIEW

Gain complete access to the largest
collection of worksheets in all subjects!

Members, please
log in to
download this
worksheet.

Not a member?
Please sign up to
gain complete
access.

www.mathworksheets4kids.com